



Simply

Good and Beautiful

MATH

3

COURSE BOOK





# TABLE OF CONTENTS

<b>References</b> .....	iv	Lesson 18: Measuring to the Half Inch .....	61
<b>About the Course</b> .....	vi	Lesson 19: Elapsed Time.....	65
<b>Frequently Asked Questions</b> .....	vii	Lesson 20: Writing Numbers to the Hundred Thousands.....	68
<b>Multiplication Mastery Chart</b> .....	viii	Lesson 21: Gallons, Quarts, Pints, and Cups: Part 1.....	71
<b>Multiplication Chart</b> .....	ix	Lesson 22: Rounding to the Nearest Dollar .....	74
<b>Unit 1</b> .....	1	Lesson 23: Fractions: Unit Fractions .....	78
Lesson 1: Numbers Through the Ten Thousands.....	2	Lesson 24: Gallons, Quarts, Pints, and Cups: Part 2.....	81
Lesson 2: Addition with Regrouping Review.....	7	Lesson 25: Elapsed Time and Estimated Time .....	84
Lesson 3: Rounding to the Nearest Ten or Hundred.....	10	Lesson 26: Reading a Pictograph and Tally Chart.....	88
Lesson 4: Multiplication: Part 1 .....	14	Lesson 27: Liters and Milliliters.....	92
Lesson 5: Multiplication: Part 2 .....	18	Lesson 28: Adding and Subtracting Rounded Amounts of Money.....	96
Lesson 6: Multiplication: Part 3 .....	21	Lessons 29–30: Unit Assessment.....	100
Lesson 7: Subtraction with Regrouping Review.....	24	<b>Unit 2</b> .....	107
Lesson 8: Story Problems with Addition and Subtraction.....	27	Lesson 31: Metric Length Conversions .....	108
Lesson 9: Two-Step Story Problems.....	30	Lesson 32: Using a Thermometer .....	111
Lesson 10: Multiplication: Part 4 .....	33	Lesson 33: Tables and Bar Graphs .....	114
Lesson 11: Telling Time to the Nearest Minute .....	37	Lesson 34: Reflectional Symmetry.....	117
Lesson 12: Measuring and Estimating Using Inches and Centimeters.....	40	Lesson 35: Fractions: Identifying and Generating Halves .....	120
Lesson 13: Measuring Length in Inches, Feet, Yards, and Miles .....	43	Lesson 36: Converting Between Inches, Feet, and Yards.....	124
Lesson 14: Multiplying by 100, 1,000, and 10,000 .....	47	Lesson 37: Creating More Bar Graphs .....	127
Lesson 15: Introduction to Metric Units.....	50	Lesson 38: Fractions Equal to 1 and Naming Fractions.....	130
Lesson 16: Time: Half- and Quarter-Hour Intervals .....	53	Lesson 39: Adding and Subtracting Inches and Feet .....	133
Lesson 17: Estimating Distance in Miles or Kilometers.....	57	Lesson 40: Venn Diagrams .....	136
		Lesson 41: Counting and Adding Money and Making Change .....	139



# TABLE OF CONTENTS

Lesson 42: Time: 5- and 10-Minute Intervals .....	142
Lesson 43: Comparing and Ordering Fractions.....	145
Lesson 44: More Symmetry .....	148
Lesson 45: Comparing Rounded Amounts with Actual Amounts.....	151
Lesson 46: Two-Step Story Problems with Money .....	154
Lesson 47: Equivalent Fractions.....	158
Lesson 48: Numbers in the Millions and Expanded Form.....	161
Lesson 49: Adding and Subtracting Yards and Feet .....	165
Lesson 50: Subtraction Across Zeros.....	168
Lesson 51: Fractions on a Number Line .....	172
Lesson 52: Reading and Creating Line Graphs .....	175
Lesson 53: Mixed Numbers .....	178
Lesson 54: Number Patterns: Part 1 .....	181
Lesson 55: Ounces, Pounds, and Tons: Part 1.....	184
Lesson 56: Adding and Subtracting Fractions with the Same Denominator.....	187
Lesson 57: Number Patterns: Part 2 .....	191
Lesson 58: Subtraction Across Zeros Shortcut.....	195
Lessons 59–60: Unit Assessment.....	198
<b>Unit 3</b> .....	206
Lesson 61: Perimeter: Part 1.....	207
Lesson 62: Multiplication: Factor Pairs .....	211
Lesson 63: Adding and Subtracting Fractions with Common Denominators .....	214
Lesson 64: Multiples of Numbers .....	217
Lesson 65: Multiplying by Multiples of 10, 100, and 1,000 ...	220
Lesson 66: Ounces, Pounds, and Tons: Part 2.....	223
Lesson 67: Introduction to Area .....	226
Lesson 68: Multiplication: Two-Digit by One-Digit Numbers.	229
Lesson 69: Negative Numbers and Temperature .....	232
Lesson 70: Grams and Kilograms: Weight of Objects .....	235
Lesson 71: Volume: Part 1 .....	238
Lesson 72: Multiplication: Two-Digit by One-Digit Numbers with Regrouping.....	241
Lesson 73: Multiplication: Story Problems .....	245
Lesson 74: Adding Money with Three Addends .....	248
Lesson 75: Multiplication: Money .....	251
Lesson 76: Perimeter: Part 2.....	254
Lesson 77: Using Multiplication to Find Area .....	258
Lesson 78: Adding and Subtracting Mixed Numbers with Common Denominators.....	261
Lesson 79: Grams and Kilograms: Compare and Order .....	264
Lesson 80: Perimeter: Part 3.....	268
Lesson 81: Multiplication: Three-Digit and Four-Digit Numbers by One Digit Without Regrouping.....	271
Lesson 82: Volume: Part 2 .....	275
Lesson 83: Perimeter: Part 4.....	278
Lesson 84: Tablespoons and Teaspoons .....	281
Lesson 85: Perfect Squares .....	284



# TABLE OF CONTENTS

Lesson 86: Multiplying Three-Digit or Four-Digit Numbers by One Digit with Regrouping.....	287
Lesson 87: Area and Perimeter: Story Problems .....	290
Lesson 88: Review Games.....	294
Lessons 89–90: Unit Assessment.....	297
<b>Unit 4</b> .....	<b>302</b>
Lesson 91: Introduction to Division .....	303
Lesson 92: Multiplication and Division Fact Families.....	306
Lesson 93: Multiplication: Missing Factor.....	309
Lesson 94: Area: Missing Side.....	312
Lesson 95: Writing and Completing Division Story Problems	315
Lesson 96: Lines, Line Segments, Points, and Rays.....	319
Lesson 97: Division with Remainders .....	323
Lesson 98: Order of Operations: Multiply and Divide, Add and Subtract.....	326
Lesson 99: Algebraic Thinking: Solving for the Missing Number .....	329
Lesson 100: Right, Acute, and Obtuse Angles.....	332
Lesson 101: Order of Operations: Parentheses .....	335
Lesson 102: Types of Lines.....	338
Lesson 103: Rounding to Any Place Value .....	342
Lesson 104: Order of Operations and Multiplying Money.....	345
Lesson 105: Comparisons .....	349
Lesson 106: Division: Story Problems .....	352
Lesson 107: Roman Numerals .....	355
Lesson 108: Coordinate Plane .....	358
Lesson 109: Identifying Triangles by Side Length .....	363
Lesson 110: Fraction of a Set: Part 1.....	366
Lesson 111: Geometric Solids (3D Shapes).....	369
Lesson 112: Converting Units of Capacity .....	372
Lesson 113: Fractions of a Set: Part 2 .....	375
Lesson 114: Identifying Quadrilaterals, Polygons, Circles, and Ovals .....	378
Lesson 115: Mixed Story Problems.....	381
Lesson 116: Congruent and Similar Shapes .....	384
Lesson 117: Unit Review.....	387
Lesson 118: Course Review.....	390
Lessons 119–120: Course Assessment.....	393
<b>Appendix</b> .....	<b>401</b>



# ABOUT THE COURSE

## Supplies Needed

- *Simply Good and Beautiful Math 3 Course Book*
- *Simply Good and Beautiful Math 3 Box*
- Pencil, dry-erase marker, whiteboard, and colored pencils
- Tape or glue, paper clip, and scissors
- Scratch paper
- Optional: *Simply Good and Beautiful Math 3 Answer Key* (available to purchase as a physical product or as a free PDF download at [goodandbeautiful.com/math3](http://goodandbeautiful.com/math3))

## Course Overview

Math 3 consists of 120 lessons divided into four units. Each unit contains themed lessons and ends with a review and assessment. New concepts are taught by the parent, but the child completes practice and review activities independently.

## Lesson Overview

Each lesson is 3–4 pages and consists of four parts: mini review, lesson, lesson practice, and review and activities.

**Mini Review Box:** Each lesson starts with a review box. You can choose to do these items as a review or only do the items the child has not mastered.

**Lesson:** The lesson sections are parent-directed and provide detailed teaching and interactive practice of the lesson topic. Blue text is instructions to the parent.

**Lesson Practice:** Dedicated practice of the lesson topic, this section is designed for the child to complete independently after the lesson with the parent.

**Review and Activities:** This section reviews concepts from previous lessons using games, activities, and logic puzzles. Children also practice multiplication facts daily. This section may be completed before or after the lesson.

## Getting Started

Simply open the course book and start teaching the lesson. Always keep the math box on hand for each lesson. After completing the lesson with a parent or teacher, the child should complete the lesson practice and review and activities.

Parents/teachers should check their children's work daily and provide immediate help and feedback. An answer key is available as a free PDF download to make it easy to check a child's work. A child who struggles with reading may need the parent or teacher to read the instructions in the lesson practice and review and activities sections.

**Lesson 53**  
**MIXED NUMBERS**

**Multiplication**  
Quiz the child on the following problems.

$10 \times 2 =$	$4 \times 1 =$	$7 \times 0 =$	$6 \times 10 =$
$10 \times 8 =$	$3 \times 1 =$	$9 \times 0 =$	$5 \times 10 =$
$8 \times 2 =$	$6 \times 2 =$	$2 \times 5 =$	$2 \times 9 =$

**MIXED NUMBERS**

**Multiplication**  
Add the child on the following problems:  
 $10 \div 2 =$     $4 \div 1 =$     $7 \div 0 =$     $6 \div 10 =$   
 $10 \div 8 =$     $3 \div 1 =$     $9 \div 0 =$     $5 \div 10 =$   
 $8 \div 2 =$     $6 \div 2 =$     $2 \div 5 =$     $2 \div 9 =$

**Read to the child:** Beavers are the national animal of Canada. Some of their favorite foods include twigs, grass, leaves, and roots of water plants. Let's suppose that a beaver gathered the twigs shown below.

The beaver collected 2 whole twigs plus  $\frac{1}{2}$  of a twig. When we put the whole number (2) next to the fraction ( $\frac{1}{2}$ ), we get a mixed number:  $2\frac{1}{2}$ . A mixed number consists of a whole number and a fraction.

It's your turn! Label each set of twigs using a mixed number by counting the number of whole twigs and writing that number in the big box. Then write the fraction that represents the part of a twig to the right of the whole number.

Suppose we want to illustrate  $2\frac{1}{2}$  leaves by shading the correct number of leaves. Begin by shading the number of whole numbers, in this case 1 whole leaf. Then shade 1 out of 2 equal parts of the last leaf.

Shade the correct number of leaves to match each mixed number. The whole number tells you how many whole leaves to shade. The fraction tells you how many parts to shade in the last leaf.

$3\frac{1}{2}$     $2\frac{1}{2}$   
 $1\frac{3}{4}$     $3\frac{3}{4}$

**LESSON PRACTICE**

Take 3 of each shape from the math box (1 yellow hexagon, 1 red trapezoid, 1 blue rhombus, and 1 green triangle). Place the shapes on the outlines to create a mixed number. You will have to move the hexagon down four spaces. Then write a mixed number to describe each picture you create.

Circle the mixed numbers.  
 $\frac{8}{9}$     $7\frac{1}{2}$     $\frac{4}{5}$     $\frac{1}{3}$   
 $3\frac{1}{4}$     $\frac{1}{8}$     $10\frac{2}{5}$     $4\frac{7}{8}$

**Busy Beavers!**  
A family of beavers used the logs below to build their dam. Write a mixed number to represent each group of logs. Count the number of whole logs and write that number in the big box. Then write the fraction that represents the part of a log to the right of the whole number.

**REVIEW & ACTIVITIES**

There are around 6,076,349 beavers in Canada. Complete the exercises based on this number.

**Spelling Book**  
Write the number in words. (Write aerial)

**Place Value Chart**  

Billions	100,000,000
Millions	10,000,000
Thousands	1,000
Ten Thousands	10,000
Hundreds	100
Tens	10
Ones	1

**Spelling Book**  
Write the number in words. (Write aerial)

**Round each amount to the nearest dollar, and enter it in the box.**  
 $\$119.56$   
 $\$79.49$

**Tangram**  
Use of the orange tangram pieces to create these images.

**Multiplication Fact Practice**  
Put a check mark in the green box when you have practiced multiplication facts for 8 for 10 minutes or more. Then complete the problems in this section.

She started at 5 minutes after 3 in the afternoon and read for 23 minutes.	<input type="checkbox"/>
She started at quarter after 9 in the morning and read for 33 minutes.	<input type="checkbox"/>
She started at ten past 7 in the evening and read for 41 minutes.	<input type="checkbox"/>

$4 \times 3 = 7 \times 5 = 7$   
 $7 \times 9 = 8 \times 8 = 4$

$7 \times 9 = 4 \times 9$   
 $3 \times 4 = 4 \times 5 = 3$



# Frequently Asked Questions

## How many lessons should my child do each week?

There are 120 lessons in the course. If the child completes four lessons per week, he or she will complete the course in a standard school year with normal breaks for vacation or sickness.

## How long do lessons take?

The average time to complete a lesson is 30–35 minutes. This includes time to teach the lesson, complete the practice and review, and practice multiplication facts.

## What if my child is too slow/fast?

- If the child takes longer than average but is understanding and retaining information, don't worry. You may want to break up the lessons. Complete the mini review and lesson practice at one time and the review and activities section at another time.
- If the child is taking less time than average but is learning new concepts, we suggest not skipping entire levels to avoid holes in his or her math foundations. Consider having him or her do multiple lessons a day to complete the course faster.
- If the child takes less than the average time and seems to already know all the information, consider having him or her take the unit assessments. Skip any units or lessons the child shows mastery on. Remember, the first few lessons of the course are review from Math 2, and it's expected that most children will know the information already.

## Do you include any specific doctrine?

No, the goal of our curriculum is not to teach doctrines specific to any particular Christian denomination but to teach general principles, such as honesty, hard work, and kindness. All Bible references in our curriculum use the King James Version.

## How do you teach multiplication facts?

The process and concept of multiplication is taught over several lessons in Unit 1. Children are then instructed to spend 10 minutes each day practicing one set of multiplication facts. Then they complete a few problems as part of the review and activities.

Families may choose which resources they use. The Good and the Beautiful offers the following options: *Musical Multiplication*, multiplication flash cards, or multiplication practice sheets.

## Is Math 3 a parent-directed level?

Math 3 lessons are designed to be parent led. These sections take an average of 12–15 minutes for the parent to teach. The other sections—lesson practice and review and activities—can be done independently by the child. The parent/teacher will need to check the child's work and should do so on a daily basis when possible, providing immediate feedback.

## Is Math 3 a spiral or mastery program?

Math 3 is mainly a spiral curriculum, constantly reviewing concepts the child has learned to ensure he or she understands and retains the information.

## What if there isn't room to complete the work?

The child may use a personal whiteboard or keep scratch paper on hand while completing the lessons.

## Do you follow Common Core?

No, our curriculum does not follow Common Core, but it does maintain a high academic standard, meeting or exceeding state standards.



# UNIT 1 OVERVIEW

## LESSONS 1-30

### Extra Supplies Needed

- 1-cup measuring cup
- measuring bowl
- paper clip
- 30 cereal pieces,
- dry beans, or raisins
- stopwatch
- tape

### New Concepts Taught

- Adding and Subtracting Rounded Amounts of Money
- Estimating Elapsed Time
- Estimating Length in Inches and Centimeters
- Identifying and Writing Numbers through the Hundred Thousands
- Multiplying by 100, 1,000, and 10,000
- Rounding to the Nearest Dollar

### Concepts Reviewed and Expanded Upon

- Addition with Regrouping
- Data: Pictographs and Tally Charts
- Elapsed Time
- Fractions
- Identifying and Converting Units of Capacity
- Measuring Using Inches and Centimeters
- Metric and US Customary Units
- Multiplication
- One- and Two-Step Story Problems
- Rounding to the Nearest Hundred
- Subtraction with Regrouping
- Telling Time to the Nearest Minute
- Telling Time Using Half- and Quarter-Hour Intervals



Lesson  
**4**

# MULTIPLICATION: PART 1

## Skip Counting

Practice these items with the child.

- Skip count by 3s from 3 to 36.
- Skip count backward by 5s from 50 to 0.



**Read to the child:** During their summer vacation last year, Chun and Bo enjoyed strolling up and down the beach collecting the most beautiful seashells. They were amazed at how God created each shell with a unique pattern. Chun set out all of her seashells along the sand and noticed that there were 3 groups of 4 seashells.




To find the total number of seashells Chun found, you can count all the seashells one by one, or you can add  $4 + 4 + 4$ . You can even skip count by 4s three times. How many total seashells did Chun find?

Have you heard of multiplication? Let's learn more about how multiplication can help us complete problems quickly. Multiplication means we add equal groups many times. For example, Chun's seashells are in equal groups of 4. Since she has 3 groups, we can add 4 seashells 3 times or multiply 3 times 4, as in this problem shown here. **Read the problem aloud with the child, pointing to each part. Say "times" for the multiplication symbol.**

$$\begin{array}{ccccccc}
 3 & \times & 4 & = & 12 \\
 \text{groups} & & \text{seashells in} & & \text{total seashells} \\
 & & \text{each group} & & 
 \end{array}$$

Give the child 30 cereal pieces, dry beans, or raisins. Bo found 6 groups of 3 seashells. Let's find out how many total seashells he found by placing 3 items (such as cereal pieces, dry beans, or raisins) into each of the 6 circles below.



How many seashells did he find? Fill in the box with the correct answer.

$$\begin{array}{ccccccc}
 6 & \times & 3 & = & \boxed{\phantom{00}} \\
 \text{groups} & & \text{seashells in} & & \text{total seashells} \\
 & & \text{each group} & & 
 \end{array}$$

Fill in the blanks by skip counting 6 times by 3s.








**Parent/Teacher Note:** This method of modeling can be used with any multiplication problem to build understanding and mastery of this concept. If necessary, continue practicing this with the child by having him or her model  $4 \times 6$ ,  $7 \times 2$ , and  $8 \times 3$ . Additional sand frames with 4, 7, and 8 groups of circles can be found on the Lesson 4 page of the Appendix. Then have the child skip count by the number of items in each group, pointing to each group while counting to find the total number.



## LESSON PRACTICE

Use your small manipulative pieces from the lesson to create groups and solve each multiplication problem below.  
Write your answers in the bubbles.



Skip count to find the answers.

$$6 \times 5 =$$

5, \_\_\_\_\_, \_\_\_\_\_, \_\_\_\_\_, \_\_\_\_\_, \_\_\_\_\_


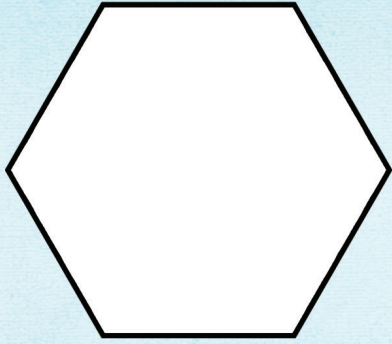

$$6 \times 2 =$$

2, \_\_\_\_\_, \_\_\_\_\_, \_\_\_\_\_, \_\_\_\_\_, \_\_\_\_\_



# Geometric Games

Use the shapes from the math box to create the large white shapes. In each white shape, draw the shapes you used to create the white shape.



# REVIEW & ACTIVITIES

Circle the digits that round up to ten.

5 8 2 9 6  
3 1 7 4 0

Circle the correct answers.

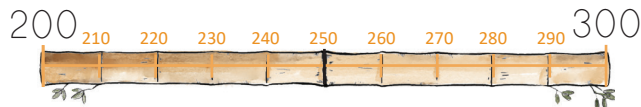
1. Round 426 to the nearest **ten**.



2. Round 752 to the nearest **hundred**.



3. Round 247 to the nearest **hundred**.



Write the numbers shown in expanded form in the green boxes below and complete the problems. Remember to use zeros as placeholders and to include commas in the answers.

$$6,000 + 50 + 1$$

$$5,000 + 400 + 2$$

,
+
3,437
_____

,
+
4,238
_____

Write the number on the chart. Remember to include the comma.

1. Sixty-seven thousand, twenty-six

Hundred Thousands	Ten Thousands	Thousands	Hundreds	Tens	Ones

2. Twenty-one thousand, ninety-seven

Hundred Thousands	Ten Thousands	Thousands	Hundreds	Tens	Ones

Complete the problems. Write the answers in the spaces below.

There were 1,762 people at the beach when Chun and Bo visited it. Round this number to the nearest hundred.

While snorkeling, Bo counted 85 fish in the ocean. Round this number to the nearest ten.

## Number Logic

What is the largest number you can create using each of these digits once?

7 6 9 4

What is the smallest number you can create using each of these digits once?

3 7 4 1

Unscramble the letters to find a number word.

- veens \_\_\_\_\_
- reeth \_\_\_\_\_
- vief \_\_\_\_\_
- ienn \_\_\_\_\_

Draw the hands on the clock to represent the time shown. Remember that the hour hand moves closer and closer to the next number as the minutes go by.





Lesson  
**8**

**STORY PROBLEMS WITH  
ADDITION AND SUBTRACTION**

Mental Math

Have the child round the following numbers to the nearest hundred, saying the answer aloud.

674    826    359    250

**Supplies**  
paper clip (keep in math box for later)

○ **Read to the child:** Lunar New Year is a time in China when friends and family exchange good wishes and gifts for the coming year. In Chinese culture it is customary to give and receive gifts using two hands, which is a sign of respect and appreciation. Bo, Chun, and their parents are buying gifts to give during Lunar New Year. Let's help them by solving the problems using addition and subtraction. **Parent/Teacher Note:** If the child struggles with reading, please read the problems in this Lesson Practice aloud.

Story problems will give you information that you need to answer a question or complete a problem. We will use the strategy of circling the information and underlining the questions to help us complete problems.



1. Chun had \$38. Then she bought a fan for \$21. How much money does she have left?

First, you find the information that is given and circle it. In this problem, we have circled "\$38" and "\$21." Next, you underline the question that needs to be answered: "How much money does she have left?" In this problem we know how much money Chun had (the total) and how much she spent (part of the total). That means we need to subtract the amount she spent from the total she had to find what she has left.

Chun had \$38

Fan = \$21

Money she has left?

$$\begin{array}{r} \$38 \\ - \$21 \\ \hline \end{array} = \square$$

\$ she had    fan    \$ she has left

2. Bo bought a lantern for \$10, a kite for \$8, and a drum for \$5. How much money did he spend altogether?

Start by circling what you know and underlining the question you need to answer. This question wants you to find a total amount. That means you will need to use addition and add all the amounts together.

Total money he spent?

Lantern = \$10    Kite = \$8    Drum = \$5

$$\begin{array}{r} \$10 \\ + \$8 \\ + \$5 \\ \hline \end{array} = \square$$

lantern    kite    drum    total \$ spent

Complete the following story problems on your whiteboard. Circle what you know and underline the question. Then decide if you need to add the amounts together to find a total or to subtract the smaller one from the total amount.

1. Their mother, Lee, had \$42. Then she bought a vase for \$23. How much money does she have left?
2. Their father, Zhang, bought a doll for \$17, a lantern for \$10, and a vase for \$23. How much money did he spend altogether?
3. Chun wants to buy another fan for \$21, but she only has \$17. How many more dollars does she need? Use subtraction.

## LESSON PRACTICE

Use the prices for each item to help you complete the problems.



How much more does the vase cost than the doll? Find the difference.

Vase = \$23		\$23	vase
Doll = \$17		- \$17	doll
		-----	
			difference

Lee wants to buy a fan. She has \$15. How many more dollars does she need?

Fan = \$21			fan
Lee has \$15			\$ Lee has
			amount she needs

Chun bought a lantern, a kite, and a drum. How much money did she spend altogether?

Lantern = \$10	Kite = \$8	Drum = \$5		
			+	
				total \$ spent

Bo had \$53. He bought a fan for his mother. How much money does he have left?

Money Bo had = \$53			\$ Bo had
Fan = \$21			fan
			amount he had left

Circle the correct answer.

1. To find the **difference**, you need to ...

**ADD | SUBTRACT**

2. To find the **sum**, you need to ...

**ADD | SUBTRACT**

## REVIEW & ACTIVITIES

# E·x·p·a·n·d·e·d FORM

Mount Everest is the highest mountain in China and the world. It rises to **29,032** feet. Write this number in expanded form.



The Yangtze River in China is **3,915** miles long. Write this number in expanded form.





Create a spinner using a paper clip and a pencil. Put the tip of the pencil through the looped end of the paper clip and set the tip of the pencil in the middle of the coin. Flick the paper clip to spin. Write the numbers you spin in the blanks below and complete the problems. Put the paper clip in the math box when you finish.



$$\begin{array}{r} 762 \\ - \\ \hline \end{array}$$

$$\begin{array}{r} 947 \\ - \\ \hline \end{array}$$

$$\begin{array}{r} 829 \\ - \\ \hline \end{array}$$

$$\begin{array}{r} 770 \\ - \\ \hline \end{array}$$

$$\begin{array}{r} 938 \\ - \\ \hline \end{array}$$

$$\begin{array}{r} 871 \\ - \\ \hline \end{array}$$

### ◆ Multiplication Fact Practice ◆

Put a check mark in the green box after you have practiced the Set A multiplication facts for 10 minutes or more by doing *Musical Multiplication*, flash cards, or multiplication practice sheets. Then complete the problems in this section.

$$\begin{array}{r} 3 \\ \times 3 \\ \hline \end{array}$$

$$\begin{array}{r} 5 \\ \times 3 \\ \hline \end{array}$$

$$\begin{array}{r} 2 \\ \times 6 \\ \hline \end{array}$$

$$\begin{array}{r} 0 \\ \times 5 \\ \hline \end{array}$$

$$\begin{array}{r} 9 \\ \times 2 \\ \hline \end{array}$$

$$\begin{array}{r} 10 \\ \times 5 \\ \hline \end{array}$$

$$\begin{array}{r} 1 \\ \times 6 \\ \hline \end{array}$$

### Equation Symmetry

Fill in each empty box with a number so that no matter which way you add three numbers (across, down, or diagonally), the sum of the three numbers equals 15. The digits 1–9 may be used only once each to complete this square.

8	1	
3	5	
		2

= 15

Fill in each empty box with a number so that no matter which way you add three numbers (across, down, or diagonally), the sum of the three numbers equals the same number. The digits 2–10 may be used only once each to complete this square.

7		3
2	6	
		5

=



Lesson  
**14**

**MULTIPLYING BY 100,  
1,000, AND 10,000**

Mental Math

**Read to the child:** To add 9 to any number, first add 10 and then subtract 1. Complete the purple problems in your mind. Say the answers aloud.


Example:  $25 + 9$  ( $25 + 10 = 35$ ;  $35 - 1 = 34$ )

- $63 + 9$
- $45 + 9$
- $27 + 9$
- $54 + 9$
- $72 + 9$

○ **Read to the child:** Every Lunar New Year, families give out red envelopes, called *hóngbāo* [hong-BAW], filled with money to the younger generations. The red color of the envelope symbolizes good wishes for the new year. In preparation for this celebration, factories in China produce red envelopes in quantities of hundreds, thousands, and ten thousands. We can use skip counting or multiplication to complete the following problems.



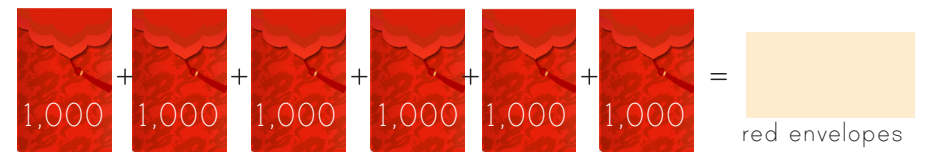
Let's suppose a factory received an order for 4 boxes of 100 red envelopes each. How many total envelopes were in the order? Add the amount in each box together to find the total.



When we have equal groups, we can also multiply. This is the same as multiplying  $4 \times 100$ . Multiply 4 times 1, and then write the 2 zeros at the end.

$$4 \begin{matrix} \text{boxes} \\ \times \\ 100 \\ \text{envelopes} \\ \text{per box} \end{matrix} = \text{[blank box]} \text{ envelopes}$$

Let's suppose this time the factory received an order for 6 boxes of 1,000 red envelopes each. How many total envelopes were in the order?



This is the same as multiplying  $6 \times 1,000$ . Multiply 6 times 1, and then write the 3 zeros at the end.

$$6 \begin{matrix} \times \\ 1,000 \\ \text{envelopes per box} \end{matrix} = \text{[blank box]} \text{ envelopes}$$

Let's suppose this time the factory received an order for 3 boxes of 10,000 red envelopes each. How many total envelopes were in the order?



This is the same as multiplying  $3 \times 10,000$ . Multiply 3 times 1, and then write the 4 zeros at the end.

$$3 \begin{matrix} \times \\ 10,000 \\ \text{envelopes per box} \end{matrix} = \text{[blank box]} \text{ envelopes}$$



Did you notice a pattern? **Pause for response.** When multiplying by 100, you wrote 2 zeros behind the number of groups. When multiplying by 1,000, you wrote 3 zeros behind the number of groups. When multiplying by 10,000, you wrote 4 zeros behind the number of groups. Using this strategy, fill in the boxes below with the products.

$5 \times 100 =$

$7 \times 1,000 =$

$8 \times 10,000 =$

**LESSON PRACTICE**

For Lunar New Year, Bo received 3 red envelopes with 100 *renminbi* (Chinese money) in each one. How much money did he receive? Write a problem and complete it to find the answer.

Chun received 5 red envelopes with 100 renminbi in each one. How much money did she receive? Write a problem and complete it to find the answer.



How many boxes of envelopes does each customer need? Circle the number of groups (boxes of envelopes) to make the correct number.

信封

100	100
100	100
100	100
100	100
100	100

900

1000	1000
1000	1000
1000	1000
1000	1000
1000	1000

7,000

10,000	10,000
10,000	10,000
10,000	10,000
10,000	10,000
10,000	10,000

80,000

Complete the problems.

$3 \times 1,000 =$

$8 \times 10,000 =$

$4 \times 100 =$

$6 \times 1,000 =$

$9 \times 10,000 =$

$8 \times 100 =$




# ROUNDING TO THE NEAREST DOLLAR

## Measurement

Have the child work on memorizing this sentence.

There are 2 cups in a pint, 2 pints in a quart, and 4 quarts in a gallon.

- **Read to the child:** Jack and Kylie love visiting the beautiful hills in Australia. Do you see Kylie and Jack on the next page? One of their favorite things to do there is run up a hill and then roll down. Look at this number line in the shape of a hill.



If you run up the hill and stop at the spot marked \$3.30, which way would you roll down, towards the \$3.00 or the \$4.00? [\$3.00] Yes, \$3.30 is closer to \$3.00 than it is to \$4.00. This means \$3.30 rounds to \$3.00.

Notice what is right in the middle of the hill: \$3.50. Half of a dollar is 50 cents. When rounding to the nearest dollar, begin by looking at the digits to the right of the decimal. If the value is equal to 50¢ or greater, it rounds up to the next dollar. When the digits after the decimal are less than 50¢ (49¢ or lower), you round down to the nearest dollar. Looking at the hill for help if needed, round each amount to the nearest dollar.

\$3.80

\$3.50

\$3.20

\$3.49

- **Read to the child:** Let's round to the nearest dollar with dollar amounts that are higher. When rounding money to the nearest dollar, we are rounding to the ones place. So if we are rounding \$125 and some cents to the nearest dollar, we would be rounding either down to \$125 or up to \$126. Looking at the hill for help if needed, round each amount to \$125 or \$126.



\$125.40

\$125.50

\$125.49

- **Game—Fields of Australia:** Take the 6-sided and 10-sided dice from the math box. **Read to the child:** Let's play a game to practice rounding to the nearest dollar. We'll complete the Set A Box on the next page first.

1. You will roll both dice and write the numbers rolled to the right of the decimal point on the first dollar amount (\$135). For example, if you rolled a 6 and then a 3, you would write "63," so the total amount would read "\$135.63." (Note: If a "10" is rolled, treat it like a zero.)
2. Then you will determine if the number rounds down or up and say the amount rounded to the nearest dollar. If the number rounds up, circle a sheep, and your turn is over. If the number rounds down, do not circle anything, and your turn is over.
3. I will do the same thing, but I will circle a cow if the number rounds up.
4. We will complete Set B Box in the same way.
5. After Set A and B are completed, count the number of sheep circled and the number of cows circled. If more sheep are circled, you win. If more cows are circled, I win. This is completely a game of chance and just for fun!



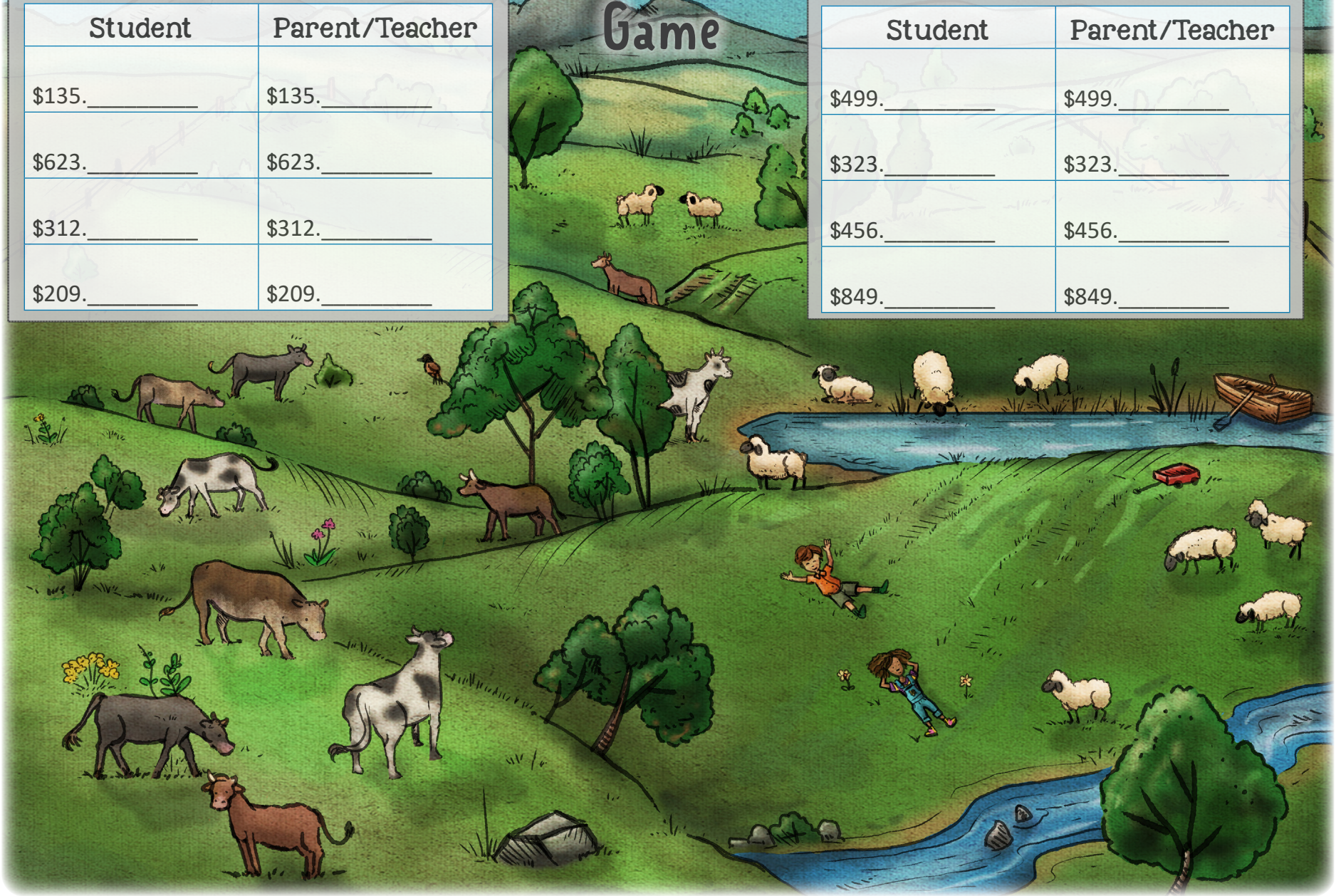
# Fields of Australia Game

Set A

Set B

Student	Parent/Teacher
\$135. _____	\$135. _____
\$623. _____	\$623. _____
\$312. _____	\$312. _____
\$209. _____	\$209. _____

Student	Parent/Teacher
\$499. _____	\$499. _____
\$323. _____	\$323. _____
\$456. _____	\$456. _____
\$849. _____	\$849. _____





# School Supply Round Up



Jack wants to buy school supplies to donate to a family in need. First, round each price to the nearest dollar and write it in the box below or next to the price tag. Then answer the questions below using rounded amounts.

- Which item costs about \$3.00?
- Which item costs the most?
- Which item costs the least?
- Jack decided to buy everything except the items that cost about \$16.00 and \$14.00 each. Which two items did he not buy?



# UNIT ASSESSMENT



## Parent/Teacher

**Read the following information aloud to the child:** Unit assessments give you practice with the math concepts learned in this unit, without having you overpractice concepts that you have mastered. These assessments also give you practice working on math problems for an extended period of time. This helps you extend focus and attention span and to be better prepared for any type of testing you will have to do in the future. Here are some tips. First, make sure to always read the instructions carefully. Sometimes you can get answers wrong simply because you did not understand the instructions. Second, do not rush through exercises you think you already know. Instead, make sure to do your work carefully. Sometimes you can get answers wrong, even though you understand the concept, just because you rushed.

For Lesson 29, have the child complete all the exercises with **PURPLE** headers only. At this level, you may need to read some of the instructions. Correct the work. If the child makes one or more mistakes in a section, explain the concept, and check the orange “Additional Practice” checkbox for that section.

For Lesson 30, have the child complete all the **ORANGE** sections that are checked. If the child still makes multiple mistakes, make sure the child understands why. All the principles will be reviewed again in upcoming units. If the child has only a few or no orange sections to practice, the child may spend time doing math games or move on to the next lesson.

**Note:** All concepts in Unit 1 will be reviewed throughout the rest of the course, but less frequently.



## Student

### NUMBERS THROUGH THE HUNDRED THOUSANDS

Circle the word form for each number.

**82,097**

- a) eighty-two thousand, ninety-seven  
b) eighty-two thousand, nine hundred seven

**401,365**

- a) four zero one, three hundred sixty-five thousand  
b) four hundred one thousand, three hundred sixty-five

Write the numbers in standard form.

$$200,000 + 70,000 + 4,000 + 500 + 30 + 8$$

--	--	--	--	--	--

nine hundred sixty-one thousand, two hundred fifty-five

--	--	--	--	--	--

### Additional Practice

Circle the word form for each number.

**36,521**

- a) thirty-six, five hundred twenty-one  
b) thirty-six thousand, five hundred twenty-one

**968,731**

- a) ninety-six eight, seven hundred thirty-one thousand  
b) nine hundred sixty-eight thousand, seven hundred thirty-one

Write the number in standard form.

$$600,000 + 9,000 + 800 + 3$$

--	--	--	--	--	--



## MULTIPLICATION


Use mental math to complete the following problems:

$0 \times 4 = \underline{\quad}$       $19 \times 1 = \underline{\quad}$       $10 \times 2 = \underline{\quad}$


$99 \times 0 = \underline{\quad}$       $2 \times 8 = \underline{\quad}$       $200 \times 1 = \underline{\quad}$

$5,000 \times 1 = \underline{\quad}$       $7 \times 10,000 = \underline{\quad}$

Write a multiplication problem and complete it to find out how many dots there are.



$\square \times \square = \square$



$\square \times \square = \square$

### Additional Practice

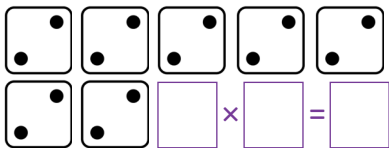
Use mental math to complete the following problems:

$0 \times 7 = \underline{\quad}$       $35 \times 1 = \underline{\quad}$       $10 \times 9 = \underline{\quad}$

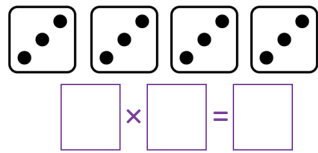
$88 \times 0 = \underline{\quad}$       $2 \times 6 = \underline{\quad}$       $5 \times 100 = \underline{\quad}$

$7 \times 1,000 = \underline{\quad}$       $2 \times 10,000 = \underline{\quad}$

Write a multiplication problem and complete it to find out how many dots there are.



$\square \times \square = \square$



$\square \times \square = \square$

## ROUNDING TO THE NEAREST TEN OR HUNDRED

Round to the nearest TEN.

452

191

808

765

Round to the nearest HUNDRED.

2,367

285

7,614

851

Circle the numbers that would round up to 10.

0    1    2    3    4    5    6    7    8    9

### Additional Practice

Round to the nearest TEN.

758

375

404

635

Round to the nearest HUNDRED.

7,249

347

3,127

461

Circle the digits that will round down to zero.

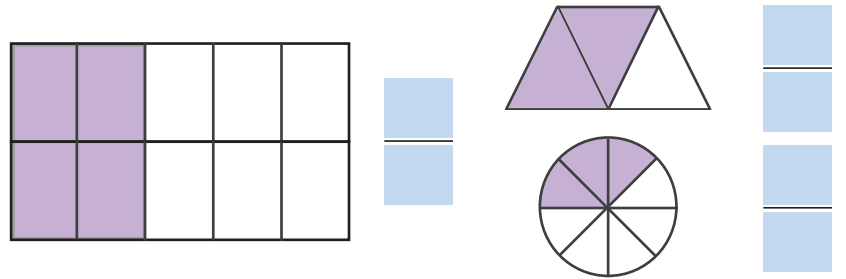
0    1    2    3    4    5    6    7    8    9

## FRACTIONS

Shade each shape according to the fraction shown.

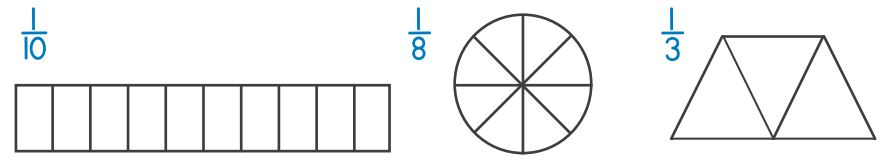


Write a fraction to show the amount that is shaded in each shape.

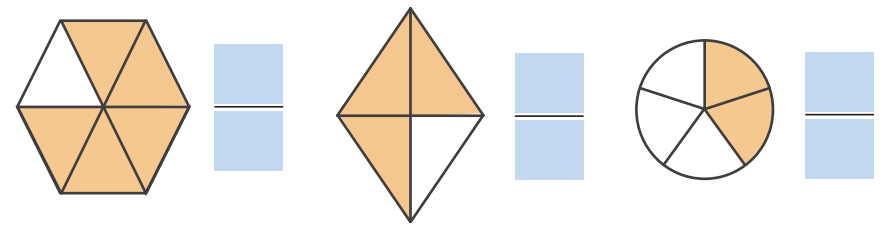


### Additional Practice

Shade each shape according to the fraction shown.



Write a fraction to show the amount that is shaded in each shape.




## MEASUREMENT

Circle the more reasonable measurement for each item.

- The length of a dollar bill      6 inches | 6 feet
- The height of a person      5 feet | 5 yards
- The length of a toothbrush      15 miles | 15 centimeters
- The distance of a drive to a nearby city      10 miles | 10 inches
- A large pitcher of orange juice      2 milliliters | 2 liters
- The length of a river      220 centimeters | 220 kilometers

What is the length of the bandage in centimeters and millimeters?



Fill in the blank with the correct conversions.

1 cm = \_\_\_\_\_ mm      1 L = \_\_\_\_\_ mL



1 gallon = \_\_\_\_\_ quarts

1 pint = \_\_\_\_\_ cups

*Continued on the next page* ➔



# UNIT 2 OVERVIEW

## LESSONS 31-60

### Extra Supplies Needed

- set of dry measuring cups
- 2 cups of flour in a medium bowl
- optional tray or plate

### New Concepts Taught

- Adding and Subtracting Inches and Feet
- Conversions Between Units of Measurement
- Creating Tables and Charts
- Expanded Form to a Million
- Fractions Comparing and Ordering
- Fractions Equal to One and Naming
- Fractions on a Number Line
- Line Graphs
- Mixed Numbers
- Rounding and Subtracting Money
- Subtraction Across Zeros

### Concepts Reviewed and Expanded Upon

- Adding and Subtracting Large Numbers
- Commutative Property of Multiplication
- Counting, Adding, and Subtracting Money
- Equivalent Fractions
- Fraction Halves
- Line of Symmetry
- Number Patterns
- Reading a Table and Bar Graph
- Telling Time
- Temperature Using a Thermometer
- Venn Diagrams
- Weight Measurements

Lesson  
**35**

**FRACTIONS: IDENTIFYING  
AND GENERATING HALVES**

**Skip Counting**

Practice items the child has not mastered.

- Review counting by 5s from 5 to 120.
- Count by 100s from 100 to 1,000.

○ **Read to the child:** Tombe and Winnie always enjoy this time of year when they get to help their parents gather the harvest from their garden. They always share half of their crops with the community as a way to bless those around them. Their family grows beans, sweet potatoes, plantains, corn, and wheat.

With fractions, when the top number (numerator) is half of the bottom number (denominator) then the fraction is equal to one-half.


Circle the correct number of boxes to represent half of the beans. What fraction of the beans are circled? To write the fraction of each crop they share, write the total number of boxes as the denominator and the number of circled boxes as the numerator in the green squares.

Beans



Circle the correct number of boxes to represent half of the sweet potatoes in the next column. What fraction of the sweet potatoes is circled?

Sweet Potatoes




For each set of boxes, circle half of the crop. What fraction of each crop is circled?

Plantains



Corn



Wheat



Fill in the blanks with the fractions that represent half:

$\frac{1}{2}$				
_____	_____	_____	_____	_____
beans	sweet potatoes	plantains	corn	wheat

Did you notice that the numerator is always half of the denominator and that the denominator is always an even number in fractions that equal one-half?









Fill in each hexagon using the specified number of shapes from the math box. Then write a fraction for the part of the hexagon that is covered with shapes. Circle the fractions that equal one-half.

=  $\frac{\square}{\square}$

2

=  $\frac{\square}{\square}$

2

=  $\frac{\square}{\square}$

4

# Geometric Fractions

=  $\frac{\square}{\square}$

1

=  $\frac{\square}{\square}$

5

=  $\frac{\square}{\square}$

3



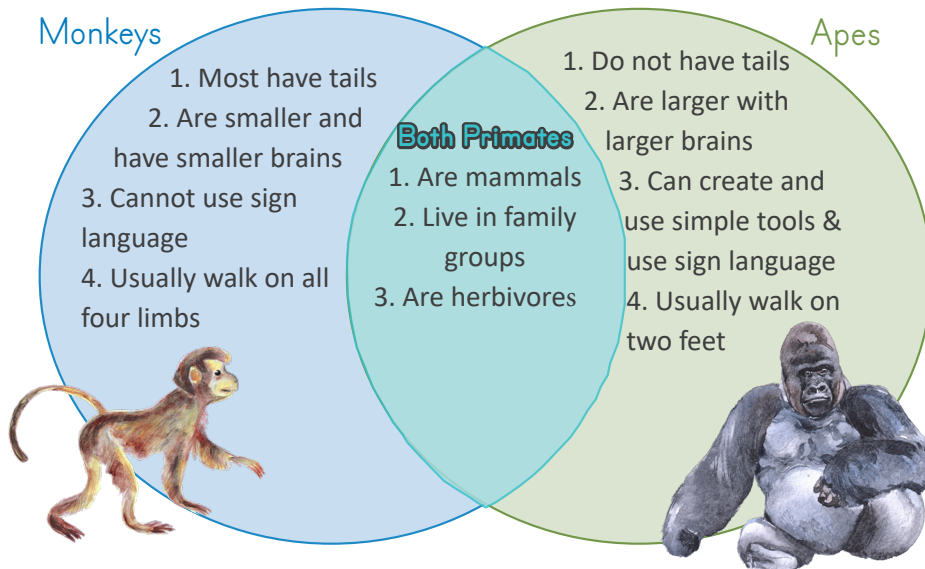
## VENN DIAGRAMS

### Temperature

Practice these items with the child.

Have the child fill in the temperature chart on the back of the array mat. Optionally, determine the current temperature inside or outside your house today.

- **Read to the child:** A Venn diagram is one method for visually showing the similarities and differences between two or more items. Many of the tourists who come on safari ask Winnie questions about the differences between the monkeys and the apes they see, so Winnie created a Venn diagram to show how they are the same and how they differ.



Use the diagram to answer the following questions aloud.

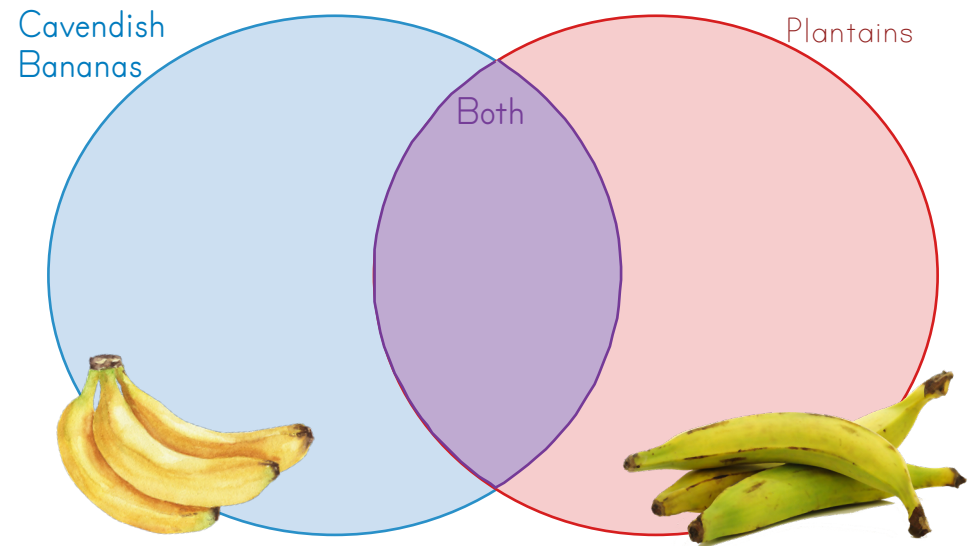
- What are two things monkeys and apes have in common?
- What is one way that apes are different from monkeys?

- Set out three colored pencils (blue, purple, red). A favorite food in Uganda (enjoyed by monkeys, apes, and humans) is bananas. As many as 94 varieties are grown there! We are going to create a Venn diagram that compares two types of bananas grown in Uganda. We'll use a blue colored pencil to underline facts unique to Cavendish bananas, red for facts about plantains, and purple for facts that apply to both. Then we'll sort the facts into the correct sections of the diagram below.

You are probably familiar with Cavendish bananas, which are the sweet yellow bananas sold in the United States. Cavendish bananas can be eaten raw or cooked. Once the banana is ripe, the skin is soft and easy to peel.

Plantains, the most commonly eaten fruit in Uganda, can also be found in the US. They are longer and wider than Cavendish bananas. The skin is thicker and does not peel easily, even when the fruit ripens. The fruit itself is starchy and unsweetened, similar to a potato, so it is almost always eaten cooked or fried, not raw.

Both Cavendish bananas and plantains come from the Musa plant family and have a long, curved shape. They start green, ripen to yellow, and finally turn brown when they are over-ripened.



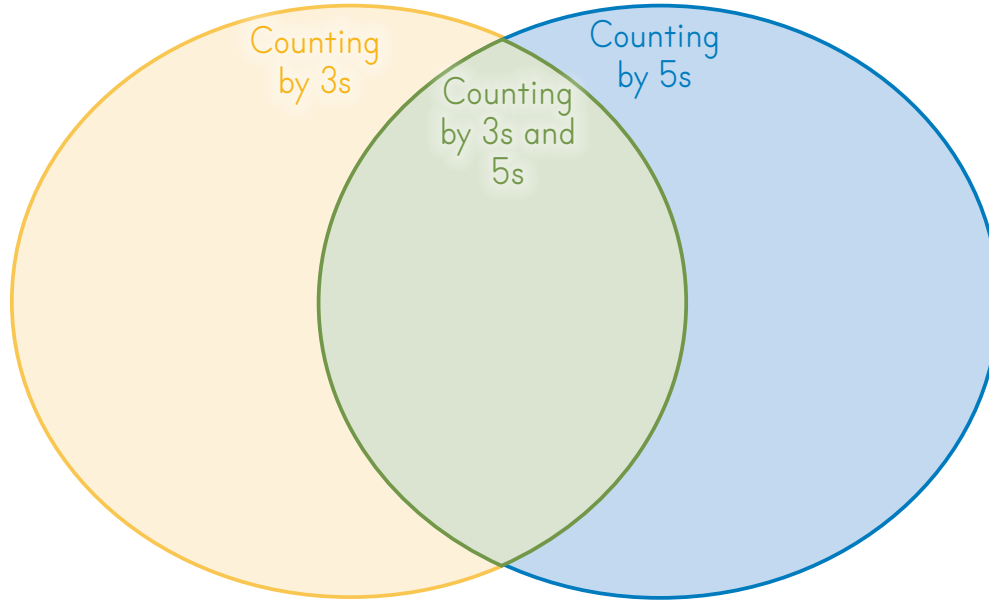
In each section of the Venn diagram, write one or two items from the paragraph that you underlined. The child needs to write only one item in each section.

## LESSON PRACTICE

### SKIP-COUNTING PATTERNS

Circle the numbers that are the same when skip counting by both 3s and 5s. Then write each number from the boxes in the correct section of the Venn diagram.

3	6	9	12	15
18	21	24	27	30
33	36	39		

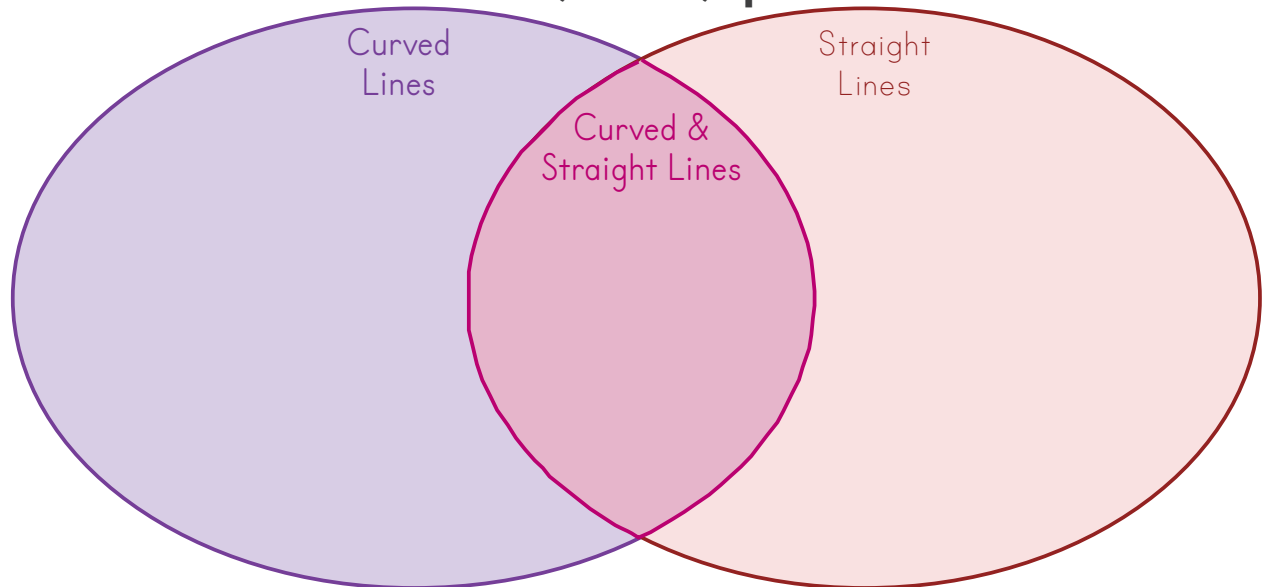


5	10
15	20
25	30
35	40

### Number Shapes

Write each number in the correct section of the Number Shapes Venn diagram. Sort the number shapes based on how they look in the boxes here.

1	2	3
4	5	6
7	8	9





## TWO-STEP STORY PROBLEMS WITH MONEY

### Telling Time

How many seconds are in a minute? How many minutes are in an hour? How many hours are in a day? What day comes before Thursday?

### Mental Math

- Skip count by 8s from 8 to 80.
- Skip count by 25s from 25 to 500.

- **Read to the child:** Ten-year-old Mia lives in Quebec City, Canada, with her parents and a little dog named Gigi. They love to walk through the old parts of the city. Today, Mama and Mia are planning a birthday party for Papa and need to buy some supplies from different shops in town. Follow their path through the town on the map on the next page as you help complete the story problems.

At the post office, Mama purchased stamps for \$18.40 and envelopes for \$6.35 so she could mail out invitations. She paid the cashier \$30.75. How much change will she receive? First, add the amounts of her purchases together to find the total cost. Then subtract the total cost from the amount paid to find the amount of change.

$$\begin{array}{r}
 \$18.40 \text{ stamps} \\
 + \$6.35 \text{ envelopes} \\
 \hline
 \text{total cost}
 \end{array}
 \rightarrow
 \begin{array}{r}
 \$30.75 \text{ paid} \\
 - \text{total cost} \\
 \hline
 \text{change due}
 \end{array}$$

Next, they stopped at the bookstore, and Mia bought a book with beautiful images of Canada's national parks as a gift for Papa. It cost \$24.96. She also bought a journal for \$8.72. If the cashier gave her \$1.32 in change, how much did she give the cashier? Add all the amounts together to find the answer.

$$\begin{array}{r}
 \$24.96 \text{ book} \\
 + \$8.72 \text{ journal} \\
 \hline
 \text{total cost}
 \end{array}
 \rightarrow
 \begin{array}{r}
 \text{total cost} \\
 + \$1.32 \text{ change} \\
 \hline
 \text{amount paid}
 \end{array}$$

At the market by the park, Mama bought some apples for \$4.36 and peaches for \$3.92. One of the apples had a worm in it, so Mama got a refund (money back) of \$0.75. How much did she spend for the fruit altogether? Complete the problems below. Will you add or subtract the refund from the total cost? Write the correct sign before solving.

$$\begin{array}{r}
 \text{apples} \\
 + \text{peaches} \\
 \hline
 \text{total cost}
 \end{array}
 \rightarrow
 \begin{array}{r}
 \text{total cost} \\
 - \$0.75 \text{ refund} \\
 \hline
 \text{amount paid}
 \end{array}$$

Next, they stopped at the pet store. Mia had \$12.25 remaining to spend. She bought a toy for \$3.47 and Gigi's dog food for \$8.15. How much money did she have left?

Finally, at the bakery Mama ordered butter tarts for \$12.75, sweet bannock bread for \$6.65, and a blueberry grunt pie for \$9.20. How much did the items cost altogether?









## SUBTRACTION ACROSS ZEROS

### Place Value

- How many hundreds, tens, and ones are in 180?
- What is the value of the digit 2 in the number 3,297?
- Which digit is in the ten millions place? 172,395,463

### Skip Counting

- Skip count by 6s from 6 to 66.
- Skip count by 60s from 60 to 660.

- **Read to the child:** Mia arrived at the library one sunny day and was excited to see that the summer reading program was starting. When the librarian asked Mia how many minutes of reading she could do over the summer, Mia chose 2,000 minutes. She read every day for the first 6 weeks. Then she added up all her minutes and subtracted them from 2,000 to find out how many more minutes she needed to reach her goal.

- **Read to the child:** Mia wrote down this problem to subtract her minutes read from the total minutes needed. She couldn't subtract 9 from 0, so she needed to borrow. **Point to the tens place (purple).** But she couldn't borrow from the tens place. **Point to the hundreds place (blue).** She looked to the hundreds place but couldn't borrow from there either. **Point to the thousands place (green).** Finally, she got to the thousands place, and now she can borrow from the 2.

$$\begin{array}{r} \overset{\text{green}}{2}, \overset{\text{blue}}{0} \overset{\text{purple}}{0} \overset{\text{purple}}{0} \\ - 1,249 \\ \hline \end{array}$$

- 1 Before she subtracts, she is going to regroup and borrow. Regrouping is renaming or changing a group of ten. **Point to the circled 2.** The circled 2 is in the thousands place and represents 2 thousands. A thousand is made up of 10 hundreds.

$$\begin{array}{r} \textcircled{2},000 \\ - 1,249 \\ \hline \end{array}$$

- 2 **Point to the 2 that is crossed out in the thousands place.** If Mia regroups 1 of the thousands into hundreds, she will have 1 thousand and 10 hundreds, which is still equal to 2 thousands. To show the regrouping, she crosses out the number in the thousands place and writes one number less above it. **Now, point to the 1 written by the 0 in the hundreds place.** To show the 10 hundreds, she writes the number 1 next to the zero in the hundreds place. Now she has the number 10 in the hundreds place, representing 10 hundreds. Ten hundreds is the same as how many thousands? [1 thousand] She has borrowed 10 hundreds from the thousands column.

$$\begin{array}{r} 1 \\ \cancel{2},000 \\ - 1,249 \\ \hline \end{array}$$

- 3 Now she can regroup and borrow from the 10 that is in the hundreds place! Mia thinks borrowing is fun. She crosses out the 10 in the hundreds place and writes a 9 because she is borrowing 1 hundred and regrouping it into 10 tens.

$$\begin{array}{r} 1 \quad 9 \\ \cancel{2}, \cancel{1}000 \\ - 1,249 \\ \hline \end{array}$$

She writes the number 1 next to the 0 in the tens place to show the 10 tens that she borrowed from the hundreds place. Now we have the number 10 in the tens place, representing 10 tens, which is the same as 1 hundred. We still have a total of 2,000, but now we are showing it as 1 thousand, 9 hundreds, and 10 tens.

$$\begin{array}{r} 1 \quad 9 \\ \cancel{2}, \cancel{1}0 \overset{1}{0}00 \\ - 1,249 \\ \hline \end{array}$$



**4** Now Mia can regroup and borrow from the tens column. She changes 1 of the tens to 10 ones. She crosses out the 10 in the tens column and writes 9. She writes the number 1 next to the zero in the ones place to show the 10 ones she borrowed from the tens place. Now she can subtract 9 from 10 in the ones column and then move on to subtract the numbers in the tens, hundreds, and thousands columns. **Have the child complete the subtraction.** Mia has read for 1,249 minutes, and she needs to read for 751 more minutes to reach her goal.

**4**

$$\begin{array}{r} 1 \quad 9 \quad 9 \\ 2, \cancel{0} \cancel{0} \cancel{0} \\ - 1,249 \\ \hline \end{array}$$

- Have the child follow the steps to regroup, borrow, and subtract while you repeat the steps in the lesson.

$$\begin{array}{r} 6,005 \\ - 4,382 \\ \hline \end{array}$$

$$\begin{array}{r} 500,000 \\ - 428,176 \\ \hline \end{array}$$

**Optional Video Lesson**

For additional practice watch the optional video lesson on [goodandbeautiful.com/math3](http://goodandbeautiful.com/math3) titled "Subtracting Across Zeros." The section below is used during the video.

$$\begin{array}{r} 2,605 \\ - 1,349 \\ \hline \end{array}$$

$$\begin{array}{r} 4,008 \\ - 1,647 \\ \hline \end{array}$$

$$\begin{array}{r} 700,000 \\ - 372,895 \\ \hline \end{array}$$





Lesson  
**54**

**NUMBER PATTERNS: PART 1**

Maple Leaf Mental Math

Find the missing numbers.

$12 + \text{maple leaf} = 18$     $\text{maple leaf} = \underline{\quad}$     $\text{maple leaf} + \text{maple leaf} = \underline{\quad}$

$\text{maple leaf} + 8 = 15$     $\text{maple leaf} = \underline{\quad}$     $\text{maple leaf} + \text{maple leaf} = \underline{\quad}$

Skip Counting

- Skip count by 8s from 8 to 88.
- Skip count by 25s from 300 to 600.

○ **Read to the child:** God created a beautiful world full of wonderful patterns and symmetry. This spiral seashell shows a growing pattern as the size of the spiral continues growing from the inside out.



We can find patterns in numbers too. Look at the number pattern below next to Mia. To find the pattern, find the difference between the first two numbers. The difference between 14 and 24 is 10. Then find the difference between the second and third numbers to see if it is the same amount. Yes, the difference between 24 and 34 is also 10. That means the rule for this pattern is plus 10. Write “+ 10” on the line for the rule. Now that you know the pattern, you can find the missing numbers. The next one is 54 plus 10. Then add 10 again to find the next number. Fill in the blanks for the first pattern.

Look at the other number patterns, starting with the first and second numbers to find the rule. Check to see if it is true for the second and third numbers. Write the rule and missing numbers in the blanks.

Mia


14, 24, 34, 44, 54,     ,     ,      Rule:     

36, 41, 46, 51, 56,     ,     ,      Rule:     

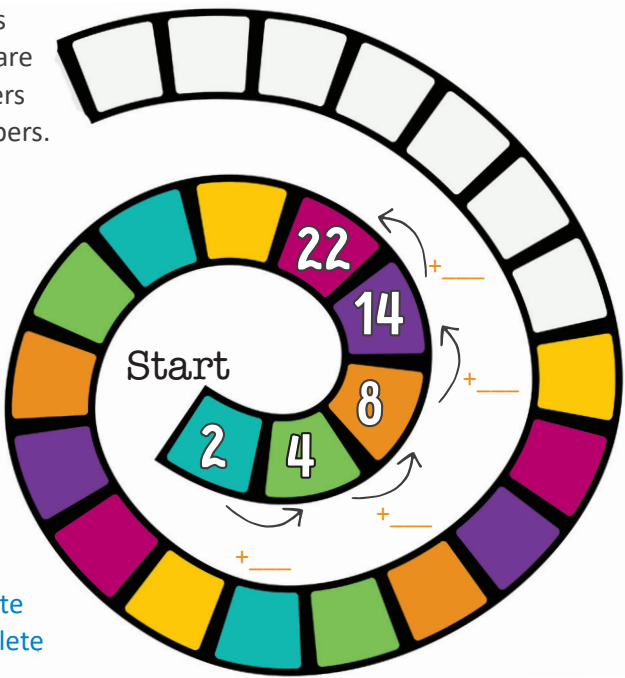
89, 78, 67, 56, 45,     ,     ,      Rule:     

120, 170, 220, 270,     ,     ,      Rule:

All the patterns you just completed are repeated patterns because you repeated the same operation to continue the pattern. Let's look at growing patterns. Look at the numbers on the steps. The difference between the first and second numbers is 2. But the difference between the second and third numbers is 3. That means that our rule cannot be plus 2. So we look at the difference between the next set of numbers. What is the difference between 10 and 6? Write the answer in the space between the numbers. Now we can see a growing pattern of +2, +3, +4. How much will you have to add to get to 15 and then to 21? Write the amounts in the blanks. Using this pattern, you can find the next 4 numbers in the pattern. Write them on the bricks to the right.



Let's try one more growing pattern. Find the differences between the numbers that are shown, and write the answers in the blanks between numbers. What pattern do you see? The number we add to the pattern increases by 2 each time. Use this pattern to find the next 3 numbers and write them on the spiral.



Optional extensions: On a whiteboard have the child create a repeated pattern using plus 6 as the rule. The child may also color the white spaces in the spiral to complete the color pattern.

## LESSON PRACTICE

Look at the number patterns below. Complete the patterns and answer the questions.

23, 33, 43, 53, 63, ...

What rule does this pattern follow? \_\_\_\_\_

Write the next three numbers in the pattern. \_\_\_\_\_, \_\_\_\_\_, \_\_\_\_\_

If the pattern continues, what will the 9th number in the pattern be?

870, 760, 650, 540, ...

What rule does this pattern follow? \_\_\_\_\_

Write the next three numbers in the pattern. \_\_\_\_\_, \_\_\_\_\_, \_\_\_\_\_

1, 4, 10, 19, ...

How much was added between the first and second number? \_\_\_\_\_

How much was added between the second and third number? \_\_\_\_\_

Write the next two numbers in the pattern. \_\_\_\_\_, \_\_\_\_\_

Find the rule and fill in the rest of the chart.

# of Legs Rule: \_\_\_\_\_

How many legs would there be if you had 9 dogs?

# of dogs	# of legs
2	8
3	12
4	
	20
6	



# UNIT 3 OVERVIEW

## LESSONS 61-90

### Extra Supplies Needed

- measuring spoons
- sugar or salt

### New Concepts Taught

- Adding and Subtracting Fractions and Mixed Numbers with Common Denominators
- Adding and Subtracting Money
- Comparing and Ordering Measurements
- Multiplication by Multiples of 10, 100, and 1,000
- Multiplication Factors
- Multiplication of 2-digit, 3-digit and 4-digit by 1-digit numbers
- Multiplication with Money
- Negative Numbers
- Story Problems with Area and Perimeter
- Using Fractions with Measurements
- Volume of Rectangular Prisms

### Concepts Reviewed and Expanded Upon

- Area
- Multiples of Numbers
- Perimeter
- Weight Measurement

### Parent/Teacher Tip

Go at the pace of the child. If the child is progressing slowly and is overwhelmed by the length of the lessons, consider not completing a full lesson each day. You can catch up by doing five days of school a week instead of four or by doing some lessons during summer break. If the child finishes a lesson quickly and is ready to do more, consider doing more than one lesson in a day.

Lesson  
**62**

**MULTIPLICATION: FACTOR PAIRS**

Calendar

Have the child complete the following.

- On the calendar chart, write the number of days in each month during a leap year.
- Which month is the 3rd month? Which is the 10th month? Which month comes after the 5th month?

Circle the factor pairs of 12. These are the numbers that can be multiplied together to equal 12.

$6 \times 4$        $1 \times 12$        $2 \times 6$   
 $3 \times 4$        $9 \times 2$        $0 \times 8$        $5 \times 5$        $7 \times 10$

- **Game: Take the 10-sided dice from the math box and two colored pencils.** We will take turns rolling the dice and finding all animals with factors that can be multiplied to equal the number rolled. For example, if the number 4 is rolled, then we can look for  $2 \times 2$  or  $1 \times 4$ . With a colored pencil, circle all the animals whose factor pair gives the product of the number rolled. If no factor pairs remain for the number rolled, roll again. Continue until all the animals have been circled. Whoever gets the most animal pairs is the winner. (Hint: Multiply the factors together to find the number they equal.)

- **Read to the child:** Have you heard the story of Noah and the ark? The Bible tells us that the animals entered the boat in *pairs*, male and female, just as God had commanded Noah. A pair is something that comes in a set of two. Circle the items below that are shown in pairs.



**Factors** are the numbers multiplied in a multiplication problem. Look at the multiplication fact at the right. The numbers 3 and 5 are a factor pair of 15, because 3 times 5 is 15.

$3 \times 5 = 15$   
 FACTORS

Fill in the missing factors.

$7 \times \underline{\quad} = 21$        $4 \times \underline{\quad} = 32$        $10 \times \underline{\quad} = 90$   
 $\underline{\quad} \times 5 = 25$        $\underline{\quad} \times 8 = 48$        $\underline{\quad} \times 2 = 8$

$1 \times 10$        $2 \times 1$   
 $2 \times 3$        $1 \times 5$   
 $7 \times 1$        $3 \times 3$   
 $1 \times 4$        $4 \times 2$   
 $5 \times 1$        $1 \times 7$   
 $2 \times 2$        $1 \times 6$   
 $9 \times 1$        $1 \times 3$   
 $2 \times 5$        $1 \times 1$



## LESSON PRACTICE

Fill in each missing factor to make the statements true.

$8 \times \underline{\quad} = 56 \quad 5 \times \underline{\quad} = 30 \quad 2 \times \underline{\quad} = 20$

$\underline{\quad} \times 6 = 42 \quad \underline{\quad} \times 3 = 24 \quad \underline{\quad} \times 9 = 81$

Write a factor pair on each pair of socks to equal the product shown on the laundry basket below the socks. An example has been done for you.

Example:



## REVIEW & ACTIVITIES

Complete the problems using the subtraction across zeros strategy.

$$\begin{array}{r} 5,005 \\ - 3,349 \\ \hline \end{array} \quad \begin{array}{r} 8,008 \\ - 5,447 \\ \hline \end{array} \quad \begin{array}{r} 6,000 \\ - 5,327 \\ \hline \end{array}$$

Continue the number patterns.

2, 4, 8,         ,         ,          Rule:                                 

100, 90, 80,         ,         ,          Rule:                                 

320, 340, 360,         ,         ,          Rule:                                 

### ◆ Multiplication Fact Practice ◆



Put a check mark in the green box when you have practiced multiplication facts Set C for 10 minutes or more. Then complete these problems.

$$\begin{array}{r} 6 \\ \times 3 \\ \hline \end{array} \quad \begin{array}{r} 5 \\ \times 6 \\ \hline \end{array} \quad \begin{array}{r} 8 \\ \times 9 \\ \hline \end{array} \quad \begin{array}{r} 7 \\ \times 5 \\ \hline \end{array} \quad \begin{array}{r} 7 \\ \times 9 \\ \hline \end{array} \quad \begin{array}{r} 6 \\ \times 7 \\ \hline \end{array} \quad \begin{array}{r} 8 \\ \times 6 \\ \hline \end{array}$$

$$\begin{array}{r} 9 \\ \times 8 \\ \hline \end{array} \quad \begin{array}{r} 9 \\ \times 6 \\ \hline \end{array} \quad \begin{array}{r} 8 \\ \times 3 \\ \hline \end{array} \quad \begin{array}{r} 7 \\ \times 9 \\ \hline \end{array} \quad \begin{array}{r} 7 \\ \times 7 \\ \hline \end{array} \quad \begin{array}{r} 6 \\ \times 8 \\ \hline \end{array} \quad \begin{array}{r} 7 \\ \times 6 \\ \hline \end{array}$$



# Tina's —Tiny— Framing Shop

If you completed *Simply Good and Beautiful Math 2*, you might remember Tina's Tiny Framing Shop. Today, she is framing tiny landscape photos of India. Use the measuring tape from the math box to measure each side of the photos in centimeters. In each blue box, write the perimeter of each photo. In each frame, write the total time it took Tina to make the frame for the photo.

perimeter =  
cm



perimeter =  
cm



Start: 1:13 PM  
End: 1:45 PM

minutes

Start: 9:00 AM  
End: 11:00 AM

hours

Elapsed Time

Elapsed Time



perimeter =  
cm

Start: 10:05 AM  
End: 10:57 AM

minutes

Elapsed Time

perimeter =  
cm



Started: 6:30 PM  
Ended: 9:30 PM

hours

Elapsed Time

The distance around a 2D shape is called the **perimeter**.  
To find the perimeter of an object, add the length of each side.



## NEGATIVE NUMBERS AND TEMPERATURE

### Temperature

Have the child fill in the temperature chart on the back of the array mat. Optionally, determine the current temperature inside or outside your house today.


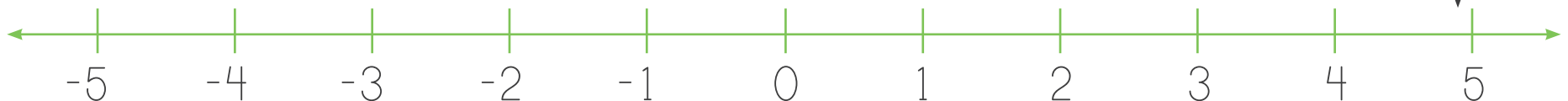
### Skip Counting

- Skip count by 7s from 7 to 77.
- Skip count by 3s backward from 36 to 0.

○ **Read to the child:** When you started learning about numbers, you began at one and learned to count up. In this course we have worked with numbers up into the millions. These numbers are positive numbers. Today, we are going to learn about negative numbers, which are numbers less than 0. Zero is not positive or negative.

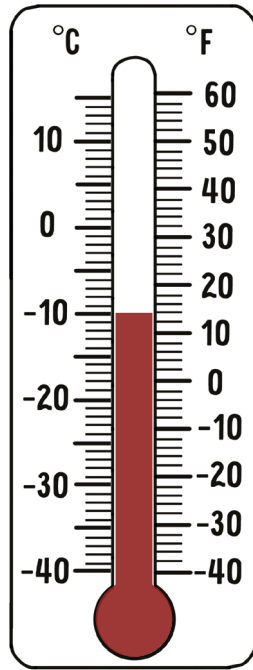
Negative numbers are numbers less than zero.

Let's look at negative numbers on a number line. Point to 0 on the number line below. If you count up 2 spaces, where will you land on the number line? Now, go back to 0 and count down 2 spaces. This is negative 2. We write it with a minus sign in front of the number. Starting at the 0 again, count down and say each number aloud as you point to it. **The child should say "negative one, negative two, negative three, negative four, negative five."** Notice how the negative numbers follow the same pattern as positive numbers.

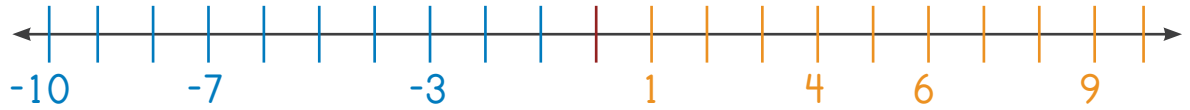




You have been measuring temperature using a thermometer, which uses a vertical number line. Thermometers often include negative numbers because temperatures can drop below 0 degrees. Look at the thermometer on the right. What temperature does it show in degrees Celsius? Another way to say this temperature is 10 degrees below 0. The lower the temperature is, the farther the negative number will be from 0. Draw a line on the thermometer at  $-40$  degrees Fahrenheit. Is this temperature warmer or colder than  $-10$  degrees Celsius?




Complete the number line below. Write 0 under the red tick mark. Fill in the missing positive numbers counting up by 1s from 1 to 10 under the orange tick marks. Then under the blue tick marks, write the negative numbers by counting down by 1s from  $-1$  to  $-10$ , moving away from 0 toward the left.



Temperatures on very tall mountains are extremely cold. Help the hikers record the daily high and low temperatures during their hike up Kanchenjunga.

Write the temperatures shown on the thermometers in degrees Celsius and Fahrenheit.

Shade the thermometers to show the correct temperatures in degrees Celsius and Fahrenheit.



HIGH

\_\_\_\_\_ °C

\_\_\_\_\_ °F

LOW

\_\_\_\_\_ °C

\_\_\_\_\_ °F

HIGH

$-10$  °C

$14$  °F

LOW

$-30$  °C

$-22$  °F

Circle the thermometer above that shows the lower (or colder) temperature.

Circle the thermometer above that shows the higher (or warmer) temperature.

## LESSON PRACTICE

Circle the correct answer to each question. Use the image of the sea levels from the lesson.

- Which object is found at  $-400$  meters?  
shipwreck | whale | deep-sea diver
- Which object is found at  $-1,400$  meters?  
submarine | whale | shipwreck
- Which object is found at  $-1,200$  meters?  
shark | whale | submarine



Lesson  
**73**

**MULTIPLICATION: STORY PROBLEMS**

**Mental Math**

- If you had a bouquet of 1 dozen flowers, how many flowers would you have? How many flowers are in 2 dozen?
- How many flowers are in a bouquet of a half dozen?

**Skip Counting**

- Skip count by 6s from 6 to 66.
- Skip count by 60s from 60 to 600.

○ **Read to the child:** Today, we will use flowers that are native to India to learn how to complete multiplication story problems. Some story problems tell you the number of equal groups and the amount in each and require multiplication to find the total. Let's look at an example.

Subha has 3 vases. She wants to put 8 lotus flowers in each vase. How many total lotus flowers will she need? This story problem requires us to find 3 groups of 8. We could add 8 plus 8 plus 8; however, multiplication is faster.



$$8 + 8 + 8 = 3 \times 8$$

vase 1
vase 2
vase 3
number of vases
number of flowers in each vase

What is 3 times 8? Subha will need a total of 24 lotus flowers.

Continue the lesson with the child on the next page before playing the Flower Path game on this page. *Continued on the next page* ➔➔

**Flower**



**Path**

Place the game pawns on "START." The first player completes a story problem. If the answer is correct, then the player rolls the dice and moves his or her game pawn the number of spaces shown on the dice. The next player follows the same steps. The first player to land on "FINISH" is the winner.

The flower grows 2 mm each day. How many millimeters did it grow in 4 days?

There are 10 flowers. Each flower has 2 leaves on the stem. How many total leaves are there?

You plant 3 flowers in each pot. There are 5 flower pots. How many total flowers do you plant?

There are 7 flowers. Each flower has 8 petals. How many total petals are there?

There are 5 bouquets of flowers. Each bouquet has 6 flowers. How many total flowers are there?

There are 4 rows of flowers in the flower bed. Each row has 10 flowers. How many total flowers are in the flower bed?

You have 2 vases. You want to put 9 flowers in each vase. How many total flowers do you need?

There are 6 kinds of flowers. There are 8 of each kind. How many total flowers are there?

There are 6 flower beds. Each one has 7 rows of flowers. How many total rows of flowers are there?

There are 7 honeybees drinking nectar from the flowers. They each visit 7 different flowers. How many total flowers do they visit?





Before we play the game, we'll practice with two more story problems. Raj has 4 vases. He wants to put 7 dahlia flowers in each vase. How many total dahlia flowers will he need?



This story problem requires us to find 4 groups of 7. Again, we could add 7 four times, but multiplying is much faster.

$$7 + 7 + 7 + 7 = 4 \times 7$$

vase 1   vase 2   vase 3   vase 4   number of vases   number of flowers in each vase

What is 4 times 7? Raj will need a total of 28 dahlia flowers.

Try this problem on your own. Kiara has 2 vases. She wants to put 10 hibiscus flowers in each vase. How many total hibiscus flowers will she need? Fill in the blanks below, and then find the product.



_____	×	_____	=	_____
number of vases		number of flowers in each vase		total flowers

○ **Read to the child:** Now we're ready to play the game. Take the 10-sided dice and two game pawns from the math box and turn back to the previous page.

## LESSON PRACTICE



Circle the story problem that correctly matches the multiplication problem. Remember to look for a story problem that talks about equal groups.



$3 \times 4$

There were 3 shrubs. Kiara picked 4 flowers from each shrub. How many flowers did Kiara pick in all?

Kiara picked 3 flowers from one shrub and 4 from another shrub. How many flowers did Kiara pick in all?

$2 \times 5$

Raj picked 5 roses and gave 2 to his mom. How many roses does Raj have left?

Raj noticed there were 2 vases on the table with 5 roses in each vase. How many total roses were there?

Complete each story problem. Then place the letters in the blanks to answer the riddle. **What kind of flowers grow on your face?**

**P**

There were 8 centerpieces with 5 flowers in each one. How many total flowers were there?

**U**

There were 7 vases. Each vase had 7 flowers. How many total flowers were there?

**L**

There were 4 rows of flowers. Each row had 6 flowers. How many total flowers were there?

**S**

There are 3 vases. You want to put 9 flowers in each vase. How many flowers do you need?

**I**

There are 10 flowers. Each flower has 6 petals. How many total petals are there?

**T**

You pick 5 flowers from each shrub. There are 2 shrubs. How many flowers do you pick?



10   49   24   60   40   27





**PERIMETER: PART 2**

**Mental Math**

- You can add or subtract 100 from a number by changing the digit in the hundreds place. Complete the problems:

$$1,459 + 100 = \quad 2,746 + 100 = \quad 8,738 + 100 =$$

$$6,927 - 100 = \quad 4,276 - 100 = \quad 7,153 - 100 =$$

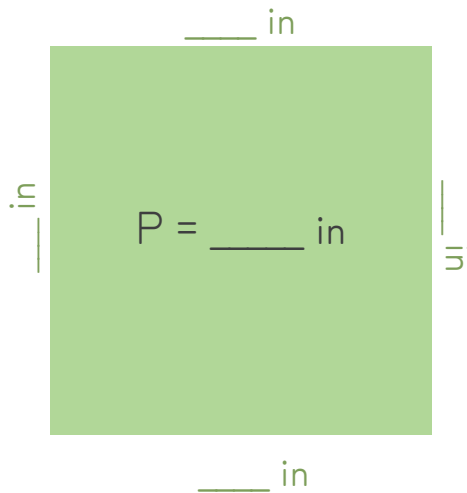
**Skip Counting**

- Skip count by 100s from 150 to 950.

**Read to the child:** Do you remember what perimeter is? [the distance around a 2D shape] Today, we will continue our discussion about perimeter.

You can find the perimeter of any shape with three or more sides by adding the length of each side. Using the measuring tape from the math box, measure each side of the green square, write the length of each side, and write the perimeter in inches. We will use the letter P to stand for perimeter.

Did you notice that each side of the square measures the exact same length? If you know the length of one side of a square, you can figure out the perimeter by adding the length of one side four times.



One sunny California afternoon, 10-year-old Rita and her 6-year-old brother, Warren, decided to do their math work in their tree fort while their parents tended to the garden. Rita's assignment was to find the perimeter of things around her home. The side of this square seed packet is 8 cm long. What is the perimeter of the seed packet?



8 cm

$$8 \text{ cm} + \underline{\quad} + \underline{\quad} + \underline{\quad} = \underline{\quad}$$



A rectangle has two long sides that are equal in length as well as two short sides that are equal in length. If you know the length and width of a rectangle, you can find the perimeter.

Fill in the missing length and width of the vegetable box, and then calculate the perimeter.

$$20 \text{ in} + 15 \text{ in} + \underline{\quad} + \underline{\quad} = \underline{\quad}$$

Using the image on the next page, help Rita find the perimeter of the items in her yard by adding the lengths of the sides. Write your answers in the boxes below and remember to include the units in your answers.

- Tree swing:
- Sandbox (square):
- Dog house:
- Firepit (hexagon):   
all sides equal
- Window:
- Back door:



Find the perimeter of the objects in Rita's backyard. Use a whiteboard to calculate the answers.





# LESSON PRACTICE

Rita's big brother, Tom, started mowing their lawn by cutting the grass around the perimeter of the yard. Without measuring, find the perimeter of the yard, and then find the perimeter of each shape based on the measurements given. Write the answers in the box below, and include the units of measurement.



P  
E  
R  
I  
M  
E  
T  
E  
R

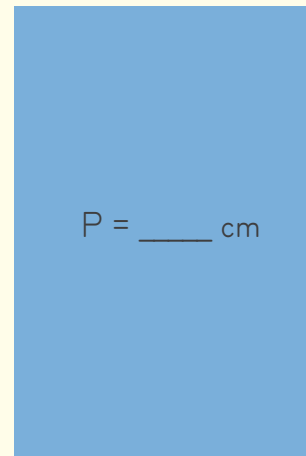
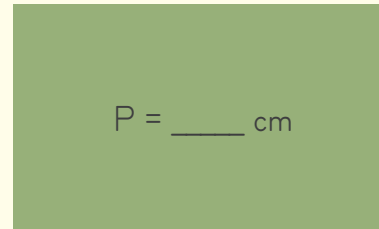
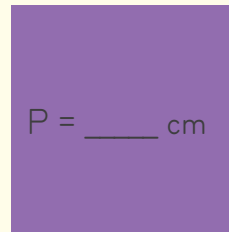
Grass: \_\_\_\_\_

Picnic blanket: \_\_\_\_\_


Book: \_\_\_\_\_

Pool: \_\_\_\_\_

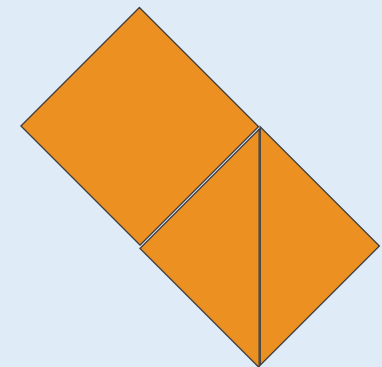
Using the centimeter side of the measuring tape, measure one side of the square and two sides of the rectangles. Record the measurements, and then add to find the perimeter.



Take the tangram pieces from the math box. Assemble them as shown below. Using the measuring tape, measure each side of the perimeter to the nearest centimeter.



Perimeter is about \_\_\_\_ cm.




Perimeter is about \_\_\_\_ cm.

## PERFECT SQUARES

### Capacity

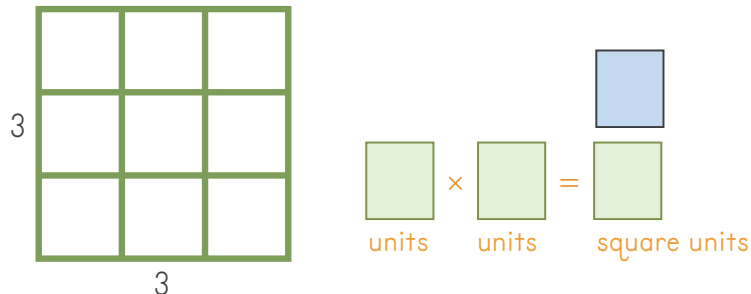
Play the "Capacity Dice Game." Refer to page ix for the instructions.



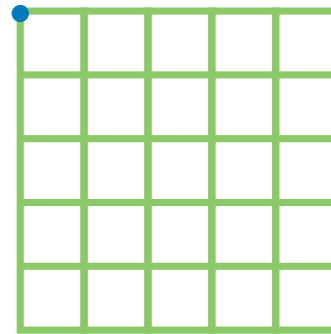
- **Read to the child:** Previously you learned that area is the space inside a 2D shape. To find the area, you multiply the number of rows by the number of columns in a rectangle or square, and you use the words "square units" in the answer because area is the number of squares needed to cover a space.



In a square, there is an equal number of rows and columns inside the shape. Look at the example below. There are 3 rows and 3 columns of square units. Count how many square units there are and write your answer in the blue box. Check your answer by multiplying the number of rows by the number of columns.



- **Read to the child:** On the grid below, draw a shape with 4 rows and 4 columns of units. To do this, start at the dot in the top left corner, and then count down 4 rows and draw another dot. Connect the dots with a line. Then, starting at the first dot, count 4 columns across and place another dot. Draw a line to connect the dots, and then complete the square shape by drawing in the other 2 sides and shading the area.



Count the number of square units in the square you just drew and complete the problem to find the area.

$$4 \text{ units} \times 4 \text{ units} = \underline{\hspace{2cm}} \text{ square units}$$

The product of a whole number multiplied by itself is called a **perfect square**.

A perfect square is the product of a whole number multiplied by itself.

## Area Arrays

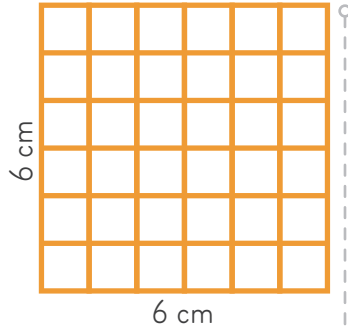
Take the array mat and a dry-erase marker from the math box.

- Draw a square that has 5 rows and 5 columns. Multiply to find the perfect square and write it below:
 
$$5 \text{ units} \times 5 \text{ units} = \underline{\hspace{2cm}} \text{ square units}$$
- Draw a perfect square with a total of 4 units. To do this, think of what number multiplied by itself equals 4. Test it on your array mat, and then fill in the equation below:
 
$$\underline{\hspace{1cm}} \text{ units} \times \underline{\hspace{1cm}} \text{ units} = 4 \text{ square units}$$
- Erase your array mat, and then draw a square that has 8 rows and 8 columns. Multiply to find the perfect square and write it below:

$$8 \text{ units} \times 8 \text{ units} = \underline{\hspace{2cm}} \text{ square units}$$



If the units are measured in inches, centimeters, feet, yards, meters, etc., you will use “square” followed by one of those units. For example, if you were measuring this square in centimeters and there were 6 rows and 6 columns, the formula to find the area would look like this:



$$6 \text{ cm} \times 6 \text{ cm} = 36 \text{ square cm}$$

In the chart below, some perfect squares are listed in the right column. This chart could go on forever!

- $1 \times 1 = 1$
- $2 \times 2 = 4$
- $3 \times 3 = 9$
- $4 \times 4 = 16$
- $5 \times 5 = 25$
- $6 \times 6 = 36$
- $7 \times 7 = 49$
- $8 \times 8 = 64$
- $9 \times 9 = 81$
- $10 \times 10 = 100$
- $11 \times 11 = 121$
- $12 \times 12 = 144$

## LESSON PRACTICE

Rita and her 14-year-old brother, Tom, wanted to fix up an old table to use in their backyard. They decided to cover the table top with 1-foot square tiles to make it strong and durable, but they weren’t sure how many tiles they would need.



$$2 \times 2 = \underline{\quad}$$



$$\underline{\quad} \times \underline{\quad} = \underline{\quad}$$



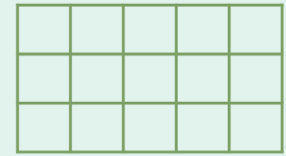
$$\underline{\quad} \times \underline{\quad} = \underline{\quad}$$

Rita started by adding one tile to the top corner of the table. One tile was definitely not enough to cover the table’s surface. Tom added three more tiles to make a square. How many tiles make up this perfect square?

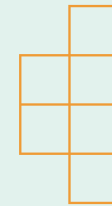
More tiles were needed to cover the table, so Rita added one more row while Tom added another column. How many rows and columns are there now? How many tiles make up this perfect square? Write a multiplication equation.

Rita added one more row and column of tiles, which covered the entire table. How many rows and columns are there? How many tiles make up this perfect square? Write a multiplication equation below.


Pretend each unit is one square inch and find the area of the following shapes.




$$\underline{\quad} \text{ sq in}$$



$$\underline{\quad} \text{ sq in}$$



$$\underline{\quad} \text{ sq in}$$



$$\underline{\quad} \text{ sq in}$$

Circle the image that is a perfect square.

# UNIT 4 OVERVIEW

## Extra Supplies Needed

none

## LESSONS 91-120

### New Concepts Taught

- Algebraic Thinking
- Area: Finding the Missing Side
- Division Story Problems
- Finding Missing Factors
- Fractions of a Set
- Identifying Geometric Solids
- Identifying Triangles by Side Length
- Introduction to Division
- Multiplication and Division Fact Families
- Multiplication and Division Story problems
- Order of Operations
- Rounding to Any Place Value
- Similar Shapes

### Concepts Reviewed and Expanded Upon

- Congruent Shapes
- Coordinate Plane
- Identifying Geometric Attributes
- Roman Numerals

### Parent/Teacher Tip

Students are not expected to completely master all the concepts taught in Unit 4, especially toward the end of the unit. Some concepts are presented to give the student familiarity with topics that will be taught and expanded on in Math 4.



Lesson  
**91**

**INTRODUCTION TO DIVISION**

**Time**

Read the time on each clock in two different ways. (For example, 2:30 could be read as "two thirty" or "half past two.")



**Skip Counting**

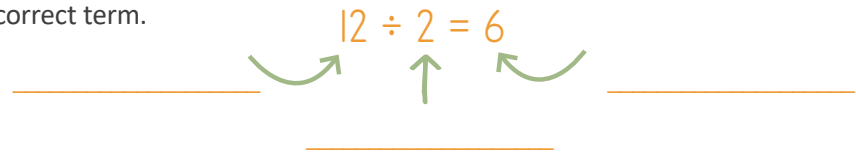
- Skip count by 9s from 9 to 99.
- Skip count by 90s from 90 to 990.




Nine-year-old twins Seth and Darius are sharing figs. This is a popular fruit in Egypt. There are 12 figs divided equally between the 2 boys.



Each part of a division problem has a specific name. The **dividend** is the number of items you are dividing—in this case, 12 figs. The **divisor** is the number of groups you are dividing into—2 groups. The **quotient** is the answer, or the number in each group—6 figs. Label each part with the correct term.



Let's look at another problem. Suppose the figs must be shared among the twin boys and their younger sister, Layla. This time we need to divide the 12 figs among 3 people. Fill in the dividend, divisor, and quotient for this situation.



○ **Read to the child:** **Division** is separating into equal groups or parts. Take 8 shapes from the math box. Divide them equally between you and me by passing out one shape at a time until all the shapes are gone.

How many shapes did we each get? Write a 4 in the box. Eight divided by 2 equals 4. This means that 8 shapes divided equally into 2 groups is 4 shapes in each group.

$8 \div 2 = \square$   
division symbol "divided by"

Let's look at another problem. This time take 6 shapes from the math box. Pass out the shapes one at a time into 3 groups.

How many shapes are in each group? Write a 2 in the box. Six divided by 3 equals 2. This means that 6 shapes divided equally into 3 groups is 2 shapes in each group.

$6 \div 3 = \square$

Continue using the shapes to complete these division problems. The first number tells you the total number of shapes. The second number tells you the number of groups.

$9 \div 3 = \square$        $6 \div 2 = \square$



LESSON PRACTICE

Draw a line from the division term to the correct part of the division equation.

$$42 \div 6 = 7$$

# Excavating in EGYPT



The twins' dad is an archaeology professor at a university. Help him sort the finds from the most recent dig by dividing them into equal groups.

6 ÷ 3 =

12 ÷ 2 =

15 ÷ 3 =

14 ÷ 2 =



Lesson  
**96**

## LINES, LINE SEGMENTS, POINTS, AND RAYS

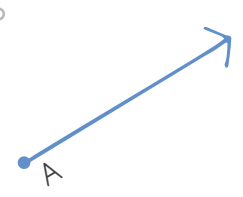
### Multiplication

Say each answer aloud:


$100 \times 8$     $50 \times 4$     $1,000 \times 5$     $40 \times 9$

### Area

- What is the area of an object with a length of 4 inches and a width of 9 inches?
- What is the length of a rectangle with an area of 21 sq ft and a width of 3 ft?



A **ray** is part of a line that has one endpoint and an arrow showing that it continues on forever. You can remember a ray by picturing a sun's rays beginning on the surface of the sun and extending out into space forever.



Match the words to the definitions by drawing line segments between the points.

Line •	• A specific position or location, often labeled with a letter
Line Segment •	• A part of a line that has one endpoint and continues on forever (the arrow represents the continuation of the line)
Ray •	• A straight length that continues on forever in both directions
Point •	• A part of a line that has two endpoints

○ **Read to the child:** Today, we will learn about points, lines, line segments, and rays. In math, a **point** is a specific position or location. Points are shown by drawing dots. A point is named by writing a letter next to the dot.



A **line** is a straight length that continues on forever in both directions. It is impossible to draw a never-ending line, so we draw arrows on the ends like this:



However, when we use the word "line," we usually don't mean a long, continuous line. We typically mean part of a line with a beginning point and an ending point. A **line segment** is part of a line that has two endpoints. A line segment is named by its two endpoints. The line segment below is named line segment AB or line segment BA.



With your finger, trace line segments AB, BC, and CD. Then trace line segments AC and BD.



To measure a line segment, place the 0 mark on your ruler right at the starting point, which is the first letter of the line segment. Measure to the end point. For the following line segments, use the centimeter side of a ruler or the measuring tape from your math box. Measure the line segments and write your measurements below.

- WX = \_\_\_\_\_
- YZ = \_\_\_\_\_
- XZ = \_\_\_\_\_
- WY = \_\_\_\_\_
- WZ = \_\_\_\_\_



Using the inch side of your ruler or measuring tape, create the following line segments by drawing and labeling the end points on the line above.

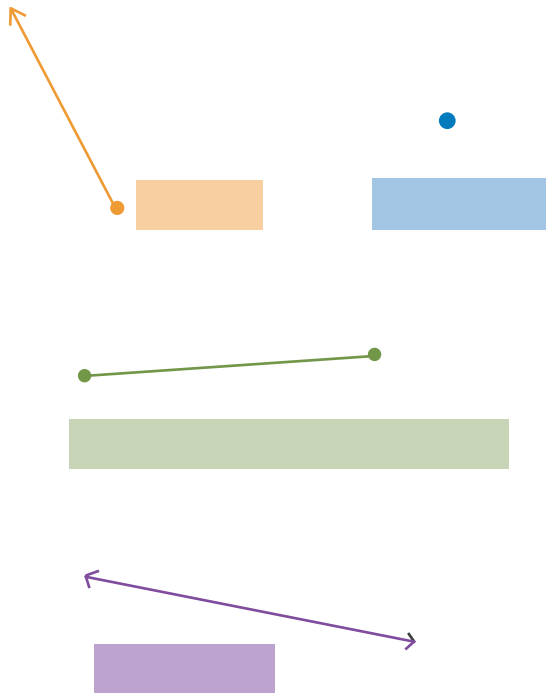
- 1.  $JN = 8$  inches
- 2.  $JK = 1$  inch
- 3.  $KM = 5$  inches
- 4.  $JL = 4$  inches

Using the points you labeled, measure these line segments in inches and fill in the blanks.

- $LM = \underline{\hspace{1cm}}$  inches
- $LN = \underline{\hspace{1cm}}$  inches
- $JM = \underline{\hspace{1cm}}$  inches
- $KN = \underline{\hspace{1cm}}$  inches

## LESSON PRACTICE

Label the following figures by writing the vocabulary words from the lesson in the boxes:



Draw a line segment connecting points O and P, a line segment between points Q and R, and another line segment connecting points O and Q. Measure the length of each line segment in inches.

O

P

Q

R

OP: \_\_\_\_\_

QR: \_\_\_\_\_

OQ: \_\_\_\_\_

## Lines IN Life

Use the vocabulary words from the lesson to label these real-life examples.

A flashlight shining into the sky:



\_\_\_\_\_



The distance from your front door to the front door of the house across the street:

\_\_\_\_\_



A pin on a map:

\_\_\_\_\_







## ORDER OF OPERATIONS: MULTIPLY AND DIVIDE, ADD AND SUBTRACT

### Mental Math

Say each sum or difference aloud.

$786 - 200 = \quad 542 - 400 = \quad 934 - 100 =$

$786 + 200 = \quad 542 + 400 = \quad 934 + 100 =$

### Skip Counting

- Skip count by 3s from 3 to 36.
- Skip count by 30s from 30 to 360.

- Guide the child through the problems below. Remember to work from left to right.

$$\begin{array}{c} 4 \times 4 \div 8 \\ \diagdown \quad \diagup \\ \square \div 8 \\ \diagdown \quad \diagup \\ \square \end{array}$$

$$\begin{array}{c} 12 \div 3 \times 7 \\ \diagdown \quad \diagup \\ \square \times 7 \\ \diagdown \quad \diagup \\ \square \end{array}$$

- Read to the child: Let's look at a different type of problem with more than one operation. Point to the problem on the right. Which two operations do you see? Addition and subtraction are inverse operations, which means they are operations that undo each other, so we need to use the left-to-right rule. Start by adding 8 and 1. Write the sum in the first box. Then subtract 3 from 9. Write the difference in the bottom box.

LEFT  $\longrightarrow$  RIGHT

$$\begin{array}{c} 8 + 1 - 3 \\ \diagdown \quad \diagup \\ \square - 3 \\ \diagdown \quad \diagup \\ \square \end{array}$$

- Read to the child: You will sometimes see more than one operation in a math problem. Point to the problem on the right. Which two operations do you see? When there are multiplication and division signs in one problem, you work from left to right. Starting from the left, we see that multiplication comes first. Multiply 10 by 2. Write the answer in the first box. The final step is to divide 20 by 5. Write the answer in the bottom box.

LEFT  $\longrightarrow$  RIGHT

$$\begin{array}{c} 10 \times 2 \div 5 \\ \diagdown \quad \diagup \\ \square \div 5 \\ \diagdown \quad \diagup \\ \square \end{array}$$

LEFT  $\longrightarrow$  RIGHT

$$\begin{array}{c} 12 - 5 + 6 \\ \diagdown \quad \diagup \\ \square + 6 \\ \diagdown \quad \diagup \\ \square \end{array}$$

Let's do another problem. Remember, we work from left to right. This time the subtraction sign is shown first. Subtract 5 from 12. Write the difference in the first box. Then add 7 and 6. Write the sum in the bottom box. Let's complete this problem going from right to left to see how it changes our answer. First add 5 and 6. Then subtract that sum from 12. Do your answers match?

- Guide the child through the problems to the right. Remember to work from left to right.

$$\begin{array}{c} 6 + 8 - 4 \\ \diagdown \quad \diagup \\ \square - 4 \\ \diagdown \quad \diagup \\ \square \end{array}$$

$$\begin{array}{c} 10 - 5 + 2 \\ \diagdown \quad \diagup \\ \square + 2 \\ \diagdown \quad \diagup \\ \square \end{array}$$

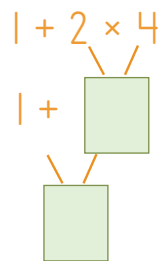
LEFT  $\longrightarrow$  RIGHT

$$\begin{array}{c} 12 \div 6 \times 4 \\ \diagdown \quad \diagup \\ \square \times 4 \\ \diagdown \quad \diagup \\ \square \end{array}$$

Take a look at this problem. It's similar to the first one we did, but this time the division sign is shown first when looking from left to right. Start by dividing 12 by 6. Write the answer in the first box. The final step is to multiply 2 by 4. Write the answer in the bottom box. When the two operations are **inverse operations**, meaning they are operations that undo each other, we use the left-to-right rule.

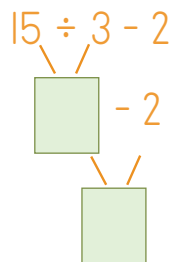


- **Read to the child:** Mathematicians came up with specific steps for completing math problems with more than one operation so answers would be consistent. Imagine how confusing it would be if you worked from left to right, but I worked from right to left. We would have two completely different answers! We call these steps the **order of operations**, and we use them when we have different operations in the same problem. The mnemonic device “Please Excuse My Dear Aunt Sally” helps us remember the order. “My Dear” stands for **m**ultiplication and **d**ivision. It comes before “Aunt Sally,” which stands for **a**ddition and **s**ubtraction. It helps us remember to do the multiplication and division part of a problem **BEFORE** the addition and subtraction. (We will learn about the “Please Excuse” part later.)



Look at this problem. Which operations do you see? Which operation do you need to complete first? Multiply 2 by 4 and write the product in the first box. The final step is to add 1 and 8 and write the sum in the answer box.

Let’s look at another problem. Which operations do you see in this problem? Use the mnemonic device to help you figure out which operation to complete first. Divide 15 by 3 and write the quotient in the first box. Then subtract 2 from 5 and write the difference in the answer box.



- **Guide the child through the problems below.** Now use the order of operations to figure out which operation to complete first. Perform any multiplication or division first, from left to right. Then perform any addition or subtraction, from left to right. Use a whiteboard to complete the problems.

$$5 \times 8 - 10$$

$$4 + 18 \div 6$$










$$4 \times 6 - 10 + 2$$

$$8 - 4 + 15 \div 3$$

## LESSON PRACTICE

Use a whiteboard to complete the problems below the chart. Write the answers in the boxes below, and then cross out the matching numbers in the grid to find the answer to the riddle.

### What did ancient Egyptians use for medicine?

Starfish  9	Flowers  11	Ginger Root  5
Vegetables  2	Seeds  42	Turtle Shell  8
Oils  17	Cricket  10	Moldy Bread  30

When multiplication and division operations are in the same problem, complete those operations from left to right. Likewise, when addition and subtraction operations are in the same problem, complete those operations from left to right.

$$4 \times 5 \div 2$$

$$54 \div 9 \times 7$$

$$3 + 7 - 5$$

$$10 - 1 + 8$$

Use the order of operations for combinations of operations in a problem. “Please Excuse My Dear Aunt Sally” reminds us that multiplication and division operations are done before addition and subtraction.

$$6 \times 3 - 10$$

$$1 + 2 \times 4$$

$$12 \div 2 - 4$$

$$8 + 21 \div 7$$



Lesson  
**105**

**COMPARISONS**

**Mental Math**

Complete both sides of the equation to show that we can add numbers in any order and get the same answer.

$$50 + (30 + 10) = (50 + 30) + 10$$

$$25 + (75 + 50) = (25 + 75) + 50$$

○ Take the two game pawns and 6-sided dice from the math box. Read to the child: Ancient Egyptians loved playing board games. Archaeologists like Seth and Darius' father have found games like the two in this lesson in Egyptian tombs. We will be playing a version of the Egyptian games "Senet" and "Mehen." (You may choose to play just one game or both.)

1. Senet: The goal of the game is to get your pawn to the other side of the board. We will each place a pawn on "start" at opposite ends of the game board. On your turn you will write a greater than, less than, or equal to symbol in the circle of the problem you are on. If you are correct, move one space toward the other side. Then it will be my turn. If you land in a space that is already completed, then move your pawn up or down the column to an uncompleted problem. Continue until someone reaches the other side with his or her pawn.
2. Mehen: We will each place our pawn on "start" on the game board on the next page. Then we will take turns rolling the dice and moving forward that many places. Find the missing number that makes the two sides of the equation equal. Write that number in the space. Continue until you reach the snake's head at the center. Repeat either game as often as desired.

**SENET**

$\frac{1}{3} + \frac{1}{3}$ ○ $\frac{5}{6} - \frac{3}{6}$	$4 \times 6$ ○ $72 \div 8$	$2 \times (7 - 5)$ ○ $36 \div 6 + 3$	$17 + 83$ ○ $44 + 56$	$100 - 47$ ○ $100 - 52$	$\$9.45 - \$3$ ○ $\$3 + \$3.45$	5 feet ○ 1 yard 2 feet	$7 \times \$0.40$ ○ $\$2.80$	1,250 g ○ 5 kg	$\$3.25 \times 3$ ○ $\$1 + \$8.90$
$\$10 - \$1.47$ start ○ $\$2.37 + \$1.29$	2 tn ○ 3,000 lb.	$\frac{2}{4}$ ○ $\frac{1}{2}$	$\$8.99 - \$4.31$ ○ $\$9 - \$4.32$	2 ft 7 in ○ 29 in	$2\frac{5}{6} - \frac{1}{6}$ ○ $\frac{1}{3}$	$3\frac{1}{8} + 2\frac{2}{8}$ ○ $7\frac{5}{8} - 2\frac{1}{8}$	$6 \times 2 + 4$ ○ $12 \div 11 + 5$	$\frac{1}{4} + \frac{1}{4}$ ○ $\frac{8}{4} - \frac{3}{4}$	$\frac{1}{3}$ start ○ 1/5 
$\frac{1}{3} + \frac{1}{3} + \frac{1}{3}$ ○ $\frac{1}{4} + \frac{1}{4} + \frac{1}{4}$	$104 - 35$ ○ $106 - 37$	1,250 cm ○ 5 m	$2 \times 4 + 1$ ○ $35 \div 7 - 2$	$\frac{2}{3} - \frac{1}{3}$ ○ $\frac{5}{6} - \frac{3}{6}$	$\$3 \times 1,000$ ○ $\$5,000 - \$1,000$	$4 \times (6 + 1)$ ○ $54 \div 6 - 3$	$\$1.25 \times 6$ ○ $\$2.50 + \$4.90$	$29 + 54$ ○ $63 + 7$	2 tn ○ 3,000 lb
									



# Mehen



○ **Read to the child:** Complete the problems, and then write the equal (=) or not equal (≠) sign in the circle.

- |                               |   |                               |
|-------------------------------|---|-------------------------------|
| $(3 \times 4) + (3 \times 5)$ | ○ | $3 \times 9$                  |
| $4 \times 5$                  | ○ | $(4 \times 2) + (4 \times 4)$ |
| $6 + 8$                       | ○ | $8 + 6$                       |
| $5 + (7 \times 2)$            | ○ | $(5 + 7) \times 2$            |



## LESSON PRACTICE


Write a number in the blank to make the statement true.

- $(2 \times \underline{\quad}) + 5 = 15$   
 $60 = (5 \times 6) + (6 \times \underline{\quad})$   
 $20 - \underline{\quad} = 16$   
 $24 = (\underline{\quad} + 2) \times 4$   
 $\underline{\quad} \times 3 = 36$

Complete each problem, and write the answer on the line below it. Then write 1st through 5th in the boxes under each problem to put the answers in each row in order from least to greatest.

$5 \times 8$	$66 \div 11$	$50 - 25$	$20 \times 3$	$100 - 80$
_____	_____	_____	_____	_____
<input type="text"/>	<input type="text"/>	<input type="text"/>	<input type="text"/>	<input type="text"/>
.....				
$(31 - 1) \div 3$	$48 \div 8$	$85 - 15$	$42 + 9$	$12 \times 4$
_____	_____	_____	_____	_____
<input type="text"/>	<input type="text"/>	<input type="text"/>	<input type="text"/>	<input type="text"/>

**FRACTION OF A SET: PART 1**



**Mental Math**

Complete the problems in your head, and then compare the answers and write the correct symbol (<, >, or =) between them.

$2 \times 3$       $15 \div 3$        $6 + 12$       $27 - 8$   
 $4 \times 2$       $32 \div 4$        $15 + 10$       $45 - 15$

○ **Read to the child:** Elsie and Finley are feeding apples to their Highland horses. For each group of apples below, circle the correct fraction for the specified set.

**YELLOW**



$\frac{3}{8}$       $\frac{4}{9}$       $\frac{5}{8}$

**LIGHT RED**



$\frac{4}{6}$       $\frac{6}{10}$       $\frac{4}{10}$

**DARK RED**



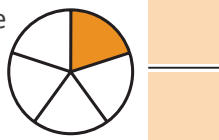
$\frac{2}{5}$       $\frac{5}{7}$       $\frac{2}{7}$

**GREEN**



$\frac{2}{5}$       $\frac{2}{3}$       $\frac{3}{5}$

○ **Read to the child:** So far you have learned how to use fractions to describe part of a whole. For example, look at the circle shown to the right. Fill in the boxes to write a fraction that represents the part of the circle that is shaded. The whole circle is divided into 5 equal parts, and 1 part is shaded, which is one-fifth of the circle.




In this lesson, we will learn about fractions of a set. Fractions can be used to describe a part of a group of objects. The denominator is the number of total objects. The numerator is the number of parts being referred to. Fill in the boxes to write a fraction that represents the part of the group of circles that is shaded.



Shade in the correct number of each set of shapes according to the fraction shown.



○ **Guide the child through the problems.** The horses enjoy eating carrots as well. Practice finding fractions of a set by shading the correct number of carrots according to the fraction shown.





# LESSON PRACTICE

Write the fraction that represents the part of each set. The denominator is the total number of horses in each the group. The numerator is the number of horses being referred to.

SPOTS

BLACK AND WHITE

GRAY




LARGE




WHITE

TAN

While out riding her horse, Elsie stopped to pick flowers for bouquets for her mother and neighbors. Write the number of each type of flower in each bouquet in boxes 1A and 2A.






<b>1A</b>		
		
		
		
		

<b>2A</b>		
		
		

<b>1B</b>					

Write the fraction of the bouquet for each type of flower in boxes 1B and 2B. Count the total number of flowers in the bouquet to find the denominator. Then write the number of the type of flower as the numerator.

<b>2B</b>			





REVIEW & ACTIVITIES

Complete the division problems. Use the orange boxes for drawing dots to help find the answers, if needed.

$10 \div 3 = \square \text{ R } \square$

$14 \div 4 = \square \text{ R } \square$



Help the Highland pony get a drink. Draw a line from each number to the bucket with the number rounded to the circled place value.

267,646,943    67,712,983    267,36,923    267,572,647 

268,000,000

270,000,000

267,360,000

267,500,000



◆ Multiplication Fact Practice ◆

Put a check mark in the green box when you have practiced multiplication facts Set D for 10 minutes or more. Then complete the problems below.

$\begin{array}{r} 10 \\ \times 12 \\ \hline \end{array}$

$\begin{array}{r} 6 \\ \times 12 \\ \hline \end{array}$

$\begin{array}{r} 12 \\ \times 12 \\ \hline \end{array}$

$\begin{array}{r} 9 \\ \times 12 \\ \hline \end{array}$

$\begin{array}{r} 11 \\ \times 12 \\ \hline \end{array}$

UnLoch  
the Mystery

The Scottish Highlands are home to a famous breed of cattle. Write the number next to each Roman numeral below, and then find the matching letter and write it in the correct place to find out where these cows like to eat.

XXIV	<input type="text"/>	O	XI	<input type="text"/>	M
C	<input type="text"/>	I	XC	<input type="text"/>	T
LXXV	<input type="text"/>	A	XVI	<input type="text"/>	N
XLVIII	<input type="text"/>	U	XIX	<input type="text"/>	S

---

11    24    48    16    90    75    100    16    19